






Christmas count out and add

Christmas Worksheet

Count how many of each type of ornament is on the tree. How many in total?



					total
+	+	+	+	+	=

Christmas count out and add

Christmas Worksheet

Count how many of each type of ornament is on the tree. How many in total?



					total
1	8	4	7	5	25