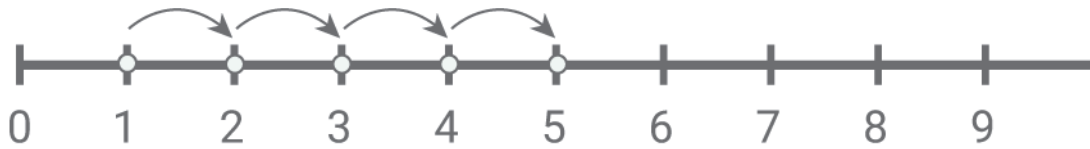


## Adding with number lines

Kindergarten Addition Worksheet

Draw the addition hops. Write the sum.



$$1 + 4 = \boxed{5}$$



$$13 + 6 = \boxed{\phantom{00}}$$



$$7 + 5 = \boxed{\phantom{00}}$$

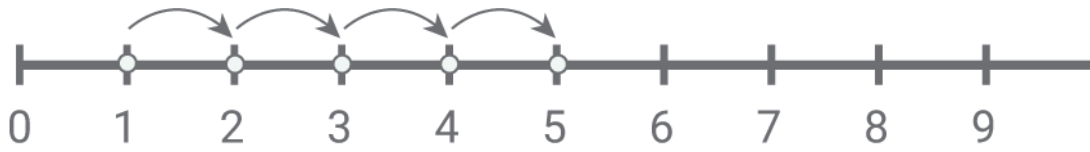


$$5 + 4 = \boxed{\phantom{00}}$$

## Adding with number lines

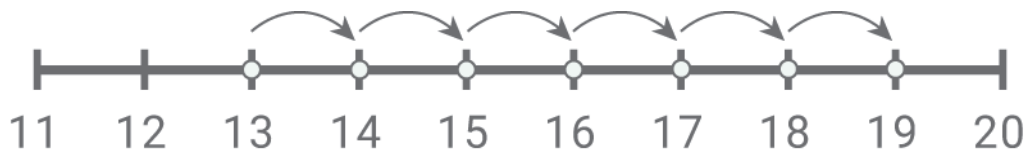
---

Answers:



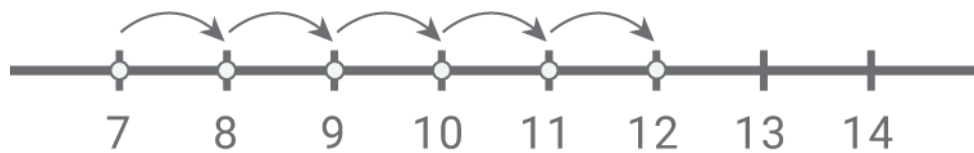
$$1 + 4 = \boxed{5}$$

---



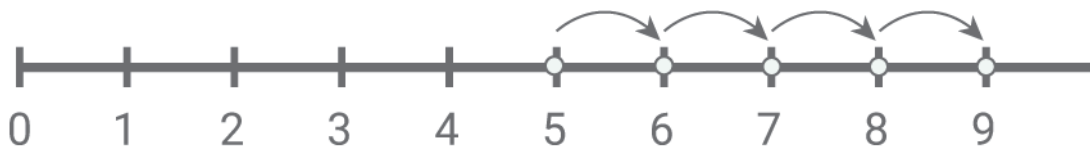
$$13 + 6 = \boxed{19}$$

---



$$7 + 5 = \boxed{12}$$

---



$$5 + 4 = \boxed{9}$$