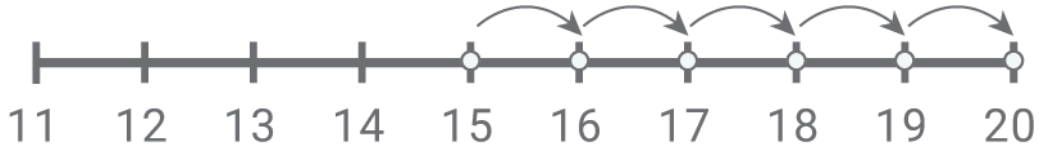


Adding with number lines

Kindergarten Addition Worksheet

Draw the addition hops. Write the missing number.



$$15 + \boxed{} = \boxed{20}$$



$$11 + \boxed{} = \boxed{17}$$



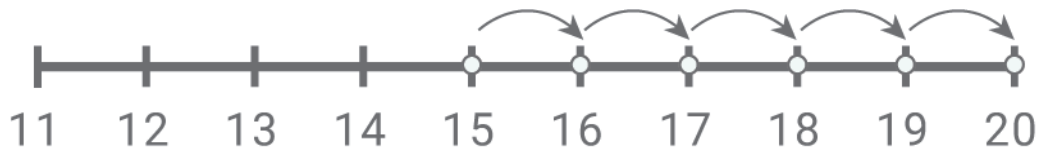
$$8 + \boxed{} = \boxed{11}$$



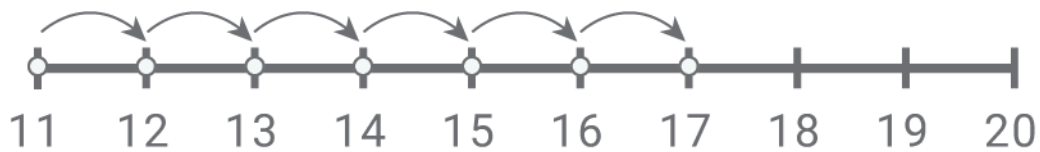
$$2 + \boxed{} = \boxed{9}$$

Adding with number lines

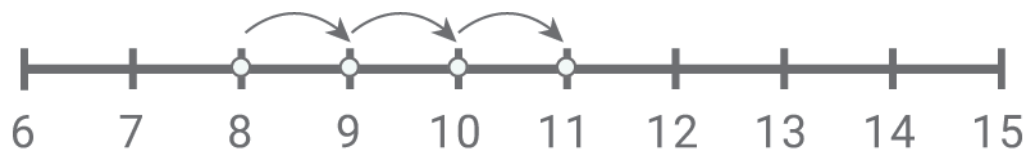
Answers:



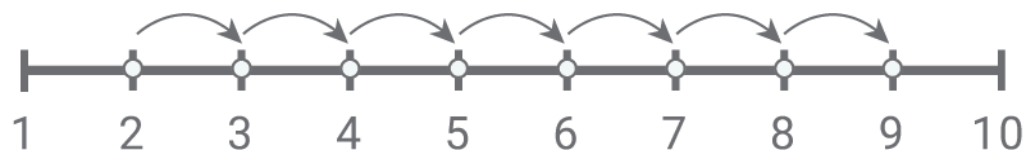
$$15 + \boxed{5} = \boxed{20}$$



$$11 + \boxed{6} = \boxed{17}$$



$$8 + \boxed{3} = \boxed{11}$$



$$2 + \boxed{7} = \boxed{9}$$