


Subtracting objects


Kindergarten Subtraction Worksheet


Circle the objects being taken away. How many are left?


1.
$$\begin{array}{r} 8 \\ - 4 \\ \hline 4 \end{array}$$


2.
$$\begin{array}{r} 4 \\ - 3 \\ \hline \end{array}$$


3.
$$\begin{array}{r} 7 \\ - 5 \\ \hline \end{array}$$


4.
$$\begin{array}{r} 5 \\ - 1 \\ \hline \end{array}$$


5.
$$\begin{array}{r} 4 \\ - 1 \\ \hline \end{array}$$


6.
$$\begin{array}{r} 6 \\ - 6 \\ \hline \end{array}$$


7.
$$\begin{array}{r} 8 \\ - 5 \\ \hline \end{array}$$


8.
$$\begin{array}{r} 2 \\ - 0 \\ \hline \end{array}$$


Answers

1. 4

2. 1

3. 2

4. 4

5. 3

6. 0

7. 3

8. 2