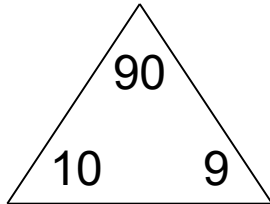


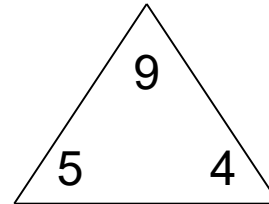
Fact families: 4 operations

Math Facts Practice Worksheet

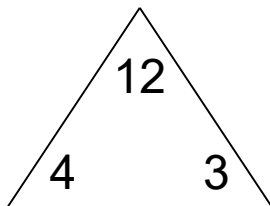
Complete each family of facts.



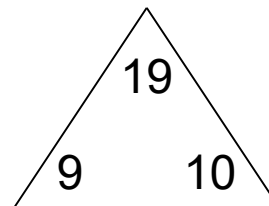
<input type="text"/>	×	<input type="text"/>	=	<input type="text"/>
<input type="text"/>	×	<input type="text"/>	=	<input type="text"/>
<input type="text"/>	÷	<input type="text"/>	=	<input type="text"/>
<input type="text"/>	÷	<input type="text"/>	=	<input type="text"/>



<input type="text"/>	+	<input type="text"/>	=	<input type="text"/>
<input type="text"/>	+	<input type="text"/>	=	<input type="text"/>
<input type="text"/>	-	<input type="text"/>	=	<input type="text"/>
<input type="text"/>	-	<input type="text"/>	=	<input type="text"/>



<input type="text"/>	×	<input type="text"/>	=	<input type="text"/>
<input type="text"/>	×	<input type="text"/>	=	<input type="text"/>
<input type="text"/>	÷	<input type="text"/>	=	<input type="text"/>
<input type="text"/>	÷	<input type="text"/>	=	<input type="text"/>

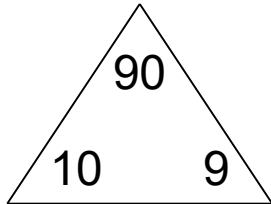


<input type="text"/>	+	<input type="text"/>	=	<input type="text"/>
<input type="text"/>	+	<input type="text"/>	=	<input type="text"/>
<input type="text"/>	-	<input type="text"/>	=	<input type="text"/>
<input type="text"/>	-	<input type="text"/>	=	<input type="text"/>

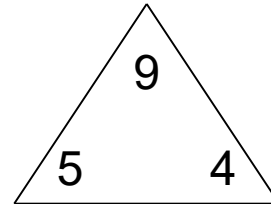
Fact families: 4 operations

Math Facts Practice Worksheet

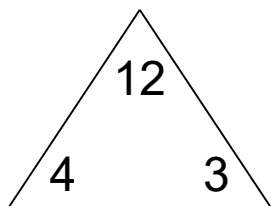
Complete each family of facts.



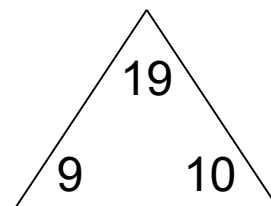
$$\begin{array}{l} \boxed{10} \times \boxed{9} = \boxed{90} \\ \boxed{9} \times \boxed{10} = \boxed{90} \\ \boxed{90} \div \boxed{10} = \boxed{9} \\ \boxed{90} \div \boxed{9} = \boxed{10} \end{array}$$



$$\begin{array}{l} \boxed{5} + \boxed{4} = \boxed{9} \\ \boxed{4} + \boxed{5} = \boxed{9} \\ \boxed{9} - \boxed{5} = \boxed{4} \\ \boxed{9} - \boxed{4} = \boxed{5} \end{array}$$



$$\begin{array}{l} \boxed{4} \times \boxed{3} = \boxed{12} \\ \boxed{3} \times \boxed{4} = \boxed{12} \\ \boxed{12} \div \boxed{4} = \boxed{3} \\ \boxed{12} \div \boxed{3} = \boxed{4} \end{array}$$



$$\begin{array}{l} \boxed{9} + \boxed{10} = \boxed{19} \\ \boxed{10} + \boxed{9} = \boxed{19} \\ \boxed{19} - \boxed{9} = \boxed{10} \\ \boxed{19} - \boxed{10} = \boxed{9} \end{array}$$