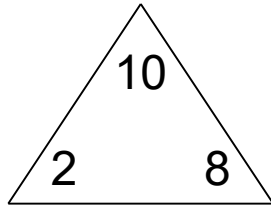


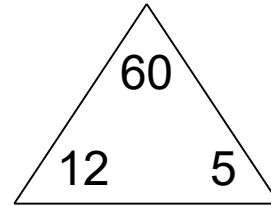
# Fact families: 4 operations

## Math Facts Practice Worksheet

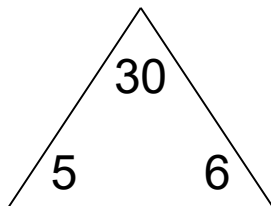
Complete each family of facts.



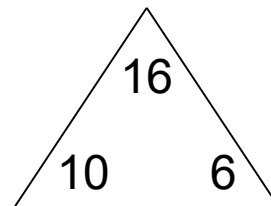
<input type="text"/>	+	<input type="text"/>	=	<input type="text"/>
<input type="text"/>	+	<input type="text"/>	=	<input type="text"/>
<input type="text"/>	-	<input type="text"/>	=	<input type="text"/>
<input type="text"/>	-	<input type="text"/>	=	<input type="text"/>



<input type="text"/>	×	<input type="text"/>	=	<input type="text"/>
<input type="text"/>	×	<input type="text"/>	=	<input type="text"/>
<input type="text"/>	÷	<input type="text"/>	=	<input type="text"/>
<input type="text"/>	÷	<input type="text"/>	=	<input type="text"/>



<input type="text"/>	×	<input type="text"/>	=	<input type="text"/>
<input type="text"/>	×	<input type="text"/>	=	<input type="text"/>
<input type="text"/>	÷	<input type="text"/>	=	<input type="text"/>
<input type="text"/>	÷	<input type="text"/>	=	<input type="text"/>

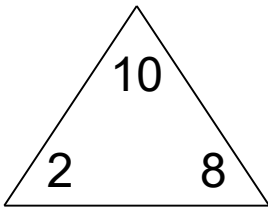


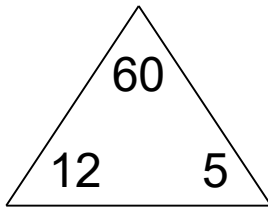
<input type="text"/>	+	<input type="text"/>	=	<input type="text"/>
<input type="text"/>	+	<input type="text"/>	=	<input type="text"/>
<input type="text"/>	-	<input type="text"/>	=	<input type="text"/>
<input type="text"/>	-	<input type="text"/>	=	<input type="text"/>

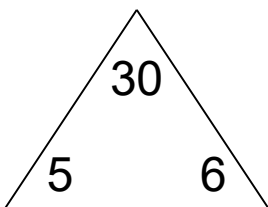
## Fact families: 4 operations

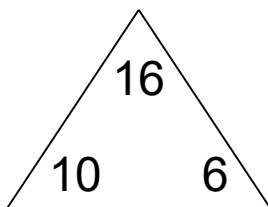
### Math Facts Practice Worksheet

Complete each family of facts.

						
2	+	8	=	10		
8	+	2	=	10		
10	-	2	=	8		
10	-	8	=	2		

						
12	×	5	=	60		
5	×	12	=	60		
60	÷	12	=	5		
60	÷	5	=	12		

						
5	×	6	=	30		
6	×	5	=	30		
30	÷	5	=	6		
30	÷	6	=	5		

						
10	+	6	=	16		
6	+	10	=	16		
16	-	10	=	6		
16	-	6	=	10		