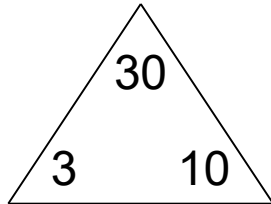


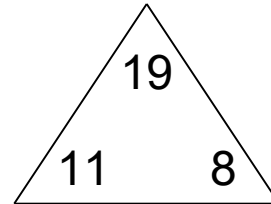
# Fact families: 4 operations

## Math Facts Practice Worksheet

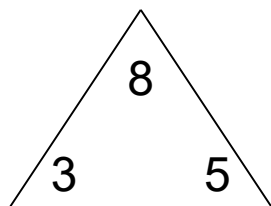
Complete each family of facts.



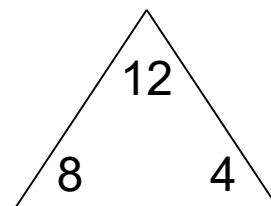
<input type="text"/>	×	<input type="text"/>	=	<input type="text"/>
<input type="text"/>	×	<input type="text"/>	=	<input type="text"/>
<input type="text"/>	÷	<input type="text"/>	=	<input type="text"/>
<input type="text"/>	÷	<input type="text"/>	=	<input type="text"/>



<input type="text"/>	+	<input type="text"/>	=	<input type="text"/>
<input type="text"/>	+	<input type="text"/>	=	<input type="text"/>
<input type="text"/>	-	<input type="text"/>	=	<input type="text"/>
<input type="text"/>	-	<input type="text"/>	=	<input type="text"/>



<input type="text"/>	+	<input type="text"/>	=	<input type="text"/>
<input type="text"/>	+	<input type="text"/>	=	<input type="text"/>
<input type="text"/>	-	<input type="text"/>	=	<input type="text"/>
<input type="text"/>	-	<input type="text"/>	=	<input type="text"/>

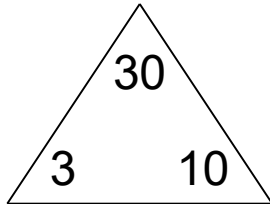


<input type="text"/>	+	<input type="text"/>	=	<input type="text"/>
<input type="text"/>	+	<input type="text"/>	=	<input type="text"/>
<input type="text"/>	-	<input type="text"/>	=	<input type="text"/>
<input type="text"/>	-	<input type="text"/>	=	<input type="text"/>

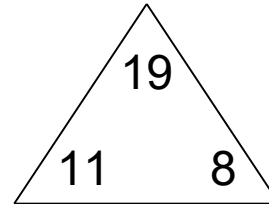
## Fact families: 4 operations

### Math Facts Practice Worksheet

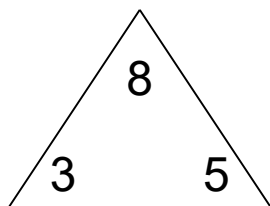
Complete each family of facts.



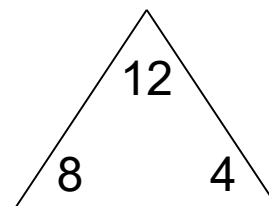
$$\begin{array}{l} \boxed{3} \times \boxed{10} = \boxed{30} \\ \boxed{10} \times \boxed{3} = \boxed{30} \\ \boxed{30} \div \boxed{3} = \boxed{10} \\ \boxed{30} \div \boxed{10} = \boxed{3} \end{array}$$



$$\begin{array}{l} \boxed{11} + \boxed{8} = \boxed{19} \\ \boxed{8} + \boxed{11} = \boxed{19} \\ \boxed{19} - \boxed{11} = \boxed{8} \\ \boxed{19} - \boxed{8} = \boxed{11} \end{array}$$



$$\begin{array}{l} \boxed{3} + \boxed{5} = \boxed{8} \\ \boxed{5} + \boxed{3} = \boxed{8} \\ \boxed{8} - \boxed{3} = \boxed{5} \\ \boxed{8} - \boxed{5} = \boxed{3} \end{array}$$



$$\begin{array}{l} \boxed{8} + \boxed{4} = \boxed{12} \\ \boxed{4} + \boxed{8} = \boxed{12} \\ \boxed{12} - \boxed{8} = \boxed{4} \\ \boxed{12} - \boxed{4} = \boxed{8} \end{array}$$