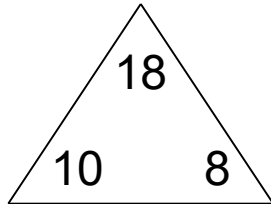


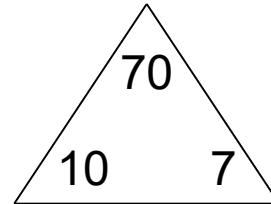
Fact families: 4 operations

Math Facts Practice Worksheet

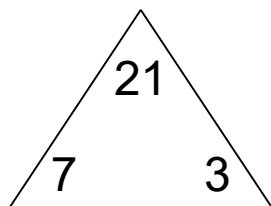
Complete each family of facts.



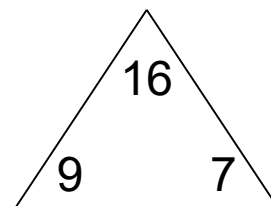
<input type="text"/>	+	<input type="text"/>	=	<input type="text"/>
<input type="text"/>	+	<input type="text"/>	=	<input type="text"/>
<input type="text"/>	-	<input type="text"/>	=	<input type="text"/>
<input type="text"/>	-	<input type="text"/>	=	<input type="text"/>



<input type="text"/>	×	<input type="text"/>	=	<input type="text"/>
<input type="text"/>	×	<input type="text"/>	=	<input type="text"/>
<input type="text"/>	÷	<input type="text"/>	=	<input type="text"/>
<input type="text"/>	÷	<input type="text"/>	=	<input type="text"/>



<input type="text"/>	×	<input type="text"/>	=	<input type="text"/>
<input type="text"/>	×	<input type="text"/>	=	<input type="text"/>
<input type="text"/>	÷	<input type="text"/>	=	<input type="text"/>
<input type="text"/>	÷	<input type="text"/>	=	<input type="text"/>

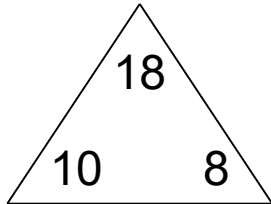


<input type="text"/>	+	<input type="text"/>	=	<input type="text"/>
<input type="text"/>	+	<input type="text"/>	=	<input type="text"/>
<input type="text"/>	-	<input type="text"/>	=	<input type="text"/>
<input type="text"/>	-	<input type="text"/>	=	<input type="text"/>

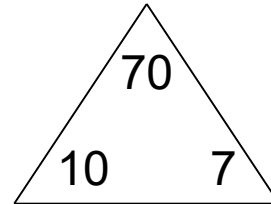
Fact families: 4 operations

Math Facts Practice Worksheet

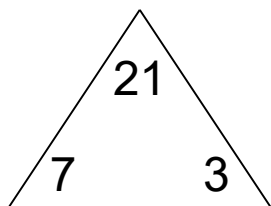
Complete each family of facts.



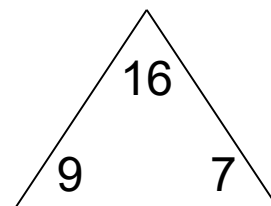
$$\begin{array}{l} \boxed{10} + \boxed{8} = \boxed{18} \\ \boxed{8} + \boxed{10} = \boxed{18} \\ \boxed{18} - \boxed{10} = \boxed{8} \\ \boxed{18} - \boxed{8} = \boxed{10} \end{array}$$



$$\begin{array}{l} \boxed{10} \times \boxed{7} = \boxed{70} \\ \boxed{7} \times \boxed{10} = \boxed{70} \\ \boxed{70} \div \boxed{10} = \boxed{7} \\ \boxed{70} \div \boxed{7} = \boxed{10} \end{array}$$



$$\begin{array}{l} \boxed{7} \times \boxed{3} = \boxed{21} \\ \boxed{3} \times \boxed{7} = \boxed{21} \\ \boxed{21} \div \boxed{7} = \boxed{3} \\ \boxed{21} \div \boxed{3} = \boxed{7} \end{array}$$



$$\begin{array}{l} \boxed{9} + \boxed{7} = \boxed{16} \\ \boxed{7} + \boxed{9} = \boxed{16} \\ \boxed{16} - \boxed{9} = \boxed{7} \\ \boxed{16} - \boxed{7} = \boxed{9} \end{array}$$