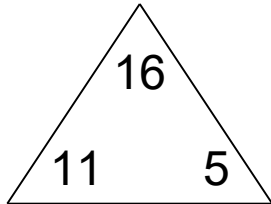


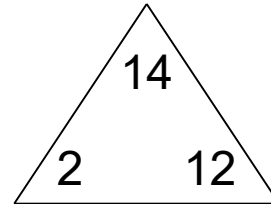
## Fact families: add and subtract

### Math Facts Practice Worksheet

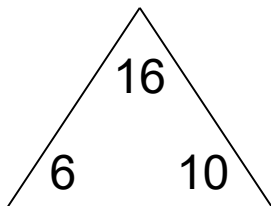
Complete each family of facts.



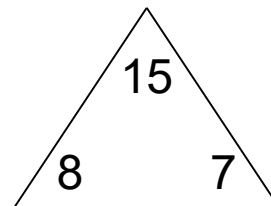
|  |   |  |   |  |
|--|---|--|---|--|
|  | + |  | = |  |
|  | + |  | = |  |
|  | - |  | = |  |
|  | - |  | = |  |



|  |   |  |   |  |
|--|---|--|---|--|
|  | + |  | = |  |
|  | + |  | = |  |
|  | - |  | = |  |
|  | - |  | = |  |



|  |   |  |   |  |
|--|---|--|---|--|
|  | + |  | = |  |
|  | + |  | = |  |
|  | - |  | = |  |
|  | - |  | = |  |

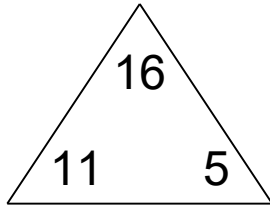


|  |   |  |   |  |
|--|---|--|---|--|
|  | + |  | = |  |
|  | + |  | = |  |
|  | - |  | = |  |
|  | - |  | = |  |

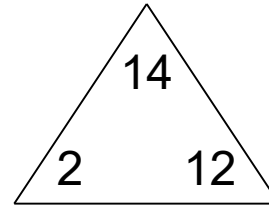
## Fact families: add and subtract

### Math Facts Practice Worksheet

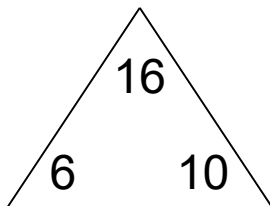
Complete each family of facts.



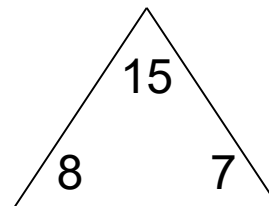
$$\begin{array}{r} \boxed{11} + \boxed{5} = \boxed{16} \\ \boxed{5} + \boxed{11} = \boxed{16} \\ \boxed{16} - \boxed{11} = \boxed{5} \\ \boxed{16} - \boxed{5} = \boxed{11} \end{array}$$



$$\begin{array}{r} \boxed{2} + \boxed{12} = \boxed{14} \\ \boxed{12} + \boxed{2} = \boxed{14} \\ \boxed{14} - \boxed{2} = \boxed{12} \\ \boxed{14} - \boxed{12} = \boxed{2} \end{array}$$



$$\begin{array}{r} \boxed{6} + \boxed{10} = \boxed{16} \\ \boxed{10} + \boxed{6} = \boxed{16} \\ \boxed{16} - \boxed{6} = \boxed{10} \\ \boxed{16} - \boxed{10} = \boxed{6} \end{array}$$



$$\begin{array}{r} \boxed{8} + \boxed{7} = \boxed{15} \\ \boxed{7} + \boxed{8} = \boxed{15} \\ \boxed{15} - \boxed{8} = \boxed{7} \\ \boxed{15} - \boxed{7} = \boxed{8} \end{array}$$