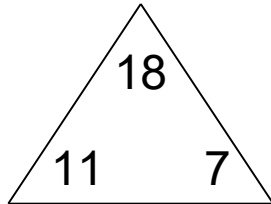


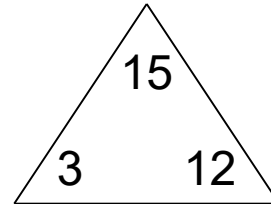
Fact families: add and subtract

Math Facts Practice Worksheet

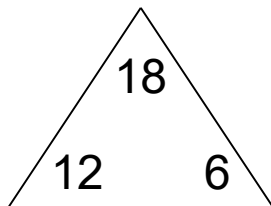
Complete each family of facts.



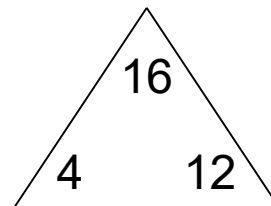
<input type="text"/>	+	<input type="text"/>	=	<input type="text"/>
<input type="text"/>	+	<input type="text"/>	=	<input type="text"/>
<input type="text"/>	-	<input type="text"/>	=	<input type="text"/>
<input type="text"/>	-	<input type="text"/>	=	<input type="text"/>



<input type="text"/>	+	<input type="text"/>	=	<input type="text"/>
<input type="text"/>	+	<input type="text"/>	=	<input type="text"/>
<input type="text"/>	-	<input type="text"/>	=	<input type="text"/>
<input type="text"/>	-	<input type="text"/>	=	<input type="text"/>



<input type="text"/>	+	<input type="text"/>	=	<input type="text"/>
<input type="text"/>	+	<input type="text"/>	=	<input type="text"/>
<input type="text"/>	-	<input type="text"/>	=	<input type="text"/>
<input type="text"/>	-	<input type="text"/>	=	<input type="text"/>

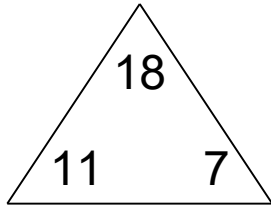


<input type="text"/>	+	<input type="text"/>	=	<input type="text"/>
<input type="text"/>	+	<input type="text"/>	=	<input type="text"/>
<input type="text"/>	-	<input type="text"/>	=	<input type="text"/>
<input type="text"/>	-	<input type="text"/>	=	<input type="text"/>

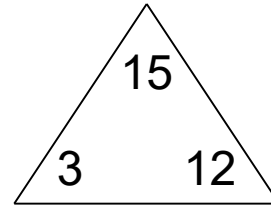
Fact families: add and subtract

Math Facts Practice Worksheet

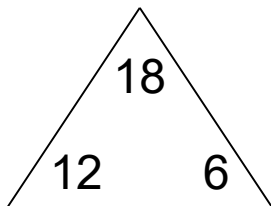
Complete each family of facts.



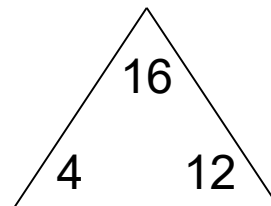
$$\begin{array}{r} 11 + 7 = 18 \\ 7 + 11 = 18 \\ 18 - 11 = 7 \\ 18 - 7 = 11 \end{array}$$



$$\begin{array}{r} 3 + 12 = 15 \\ 12 + 3 = 15 \\ 15 - 3 = 12 \\ 15 - 12 = 3 \end{array}$$



$$\begin{array}{r} 12 + 6 = 18 \\ 6 + 12 = 18 \\ 18 - 12 = 6 \\ 18 - 6 = 12 \end{array}$$



$$\begin{array}{r} 4 + 12 = 16 \\ 12 + 4 = 16 \\ 16 - 4 = 12 \\ 16 - 12 = 4 \end{array}$$