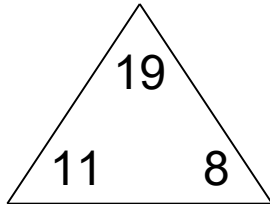


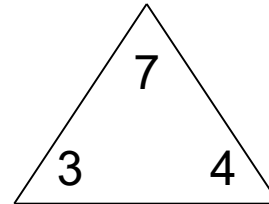
Fact families: add and subtract

Math Facts Practice Worksheet

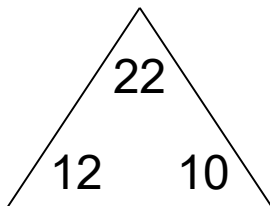
Complete each family of facts.



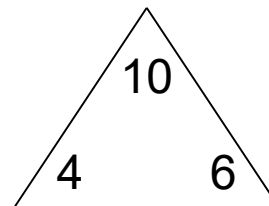
<input type="text"/>	+	<input type="text"/>	=	<input type="text"/>
<input type="text"/>	+	<input type="text"/>	=	<input type="text"/>
<input type="text"/>	-	<input type="text"/>	=	<input type="text"/>
<input type="text"/>	-	<input type="text"/>	=	<input type="text"/>



<input type="text"/>	+	<input type="text"/>	=	<input type="text"/>
<input type="text"/>	+	<input type="text"/>	=	<input type="text"/>
<input type="text"/>	-	<input type="text"/>	=	<input type="text"/>
<input type="text"/>	-	<input type="text"/>	=	<input type="text"/>



<input type="text"/>	+	<input type="text"/>	=	<input type="text"/>
<input type="text"/>	+	<input type="text"/>	=	<input type="text"/>
<input type="text"/>	-	<input type="text"/>	=	<input type="text"/>
<input type="text"/>	-	<input type="text"/>	=	<input type="text"/>

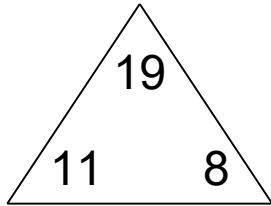


<input type="text"/>	+	<input type="text"/>	=	<input type="text"/>
<input type="text"/>	+	<input type="text"/>	=	<input type="text"/>
<input type="text"/>	-	<input type="text"/>	=	<input type="text"/>
<input type="text"/>	-	<input type="text"/>	=	<input type="text"/>

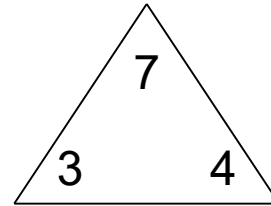
Fact families: add and subtract

Math Facts Practice Worksheet

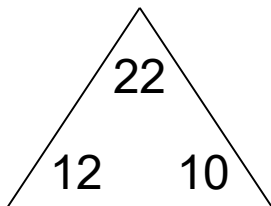
Complete each family of facts.



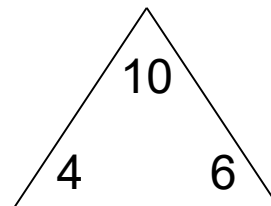
$$\begin{array}{r} 11 + 8 = 19 \\ 8 + 11 = 19 \\ 19 - 11 = 8 \\ 19 - 8 = 11 \end{array}$$



$$\begin{array}{r} 3 + 4 = 7 \\ 4 + 3 = 7 \\ 7 - 3 = 4 \\ 7 - 4 = 3 \end{array}$$



$$\begin{array}{r} 12 + 10 = 22 \\ 10 + 12 = 22 \\ 22 - 12 = 10 \\ 22 - 10 = 12 \end{array}$$



$$\begin{array}{r} 4 + 6 = 10 \\ 6 + 4 = 10 \\ 10 - 4 = 6 \\ 10 - 6 = 4 \end{array}$$