


# Counting objects (up to 30)

## Grade 1 Counting Worksheet

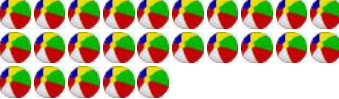
Count the objects and write the total.


1)  = \_\_\_\_\_


2)  = \_\_\_\_\_

3)  = \_\_\_\_\_

4)  = \_\_\_\_\_

5)  = \_\_\_\_\_


6)  = \_\_\_\_\_

7)  = \_\_\_\_\_


8)  = \_\_\_\_\_

9)  = \_\_\_\_\_

10)  = \_\_\_\_\_

11)  = \_\_\_\_\_

12)  = \_\_\_\_\_


13)  = \_\_\_\_\_

14)  = \_\_\_\_\_

# Counting objects (up to 30)

## Grade 1 Counting Worksheet

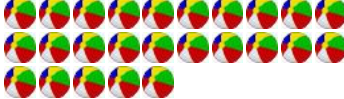
Count the objects and write the total.


1)  = 18


2)  = 14


3)  = 8

4)  = 2

5)  = 25

6)  = 28

7)  = 21


8)  = 10

9)  = 6

10)  = 17

11)  = 9

12)  = 23

13)  = 16

14)  = 12