


Counting objects (up to 30)

Grade 1 Counting Worksheet

Count the objects and write the total.


1)  = _____

2)  = _____

3)  = _____

4)  = _____

5)  = _____

6)  = _____

7)  = _____

8)  = _____


9)  = _____

10)  = _____

11)  = _____

12)  = _____

13)  = _____

14)  = _____

Counting objects (up to 30)

Grade 1 Counting Worksheet

Count the objects and write the total.

1) = 15

2) = 22

3) = 8

4) = 9

5) = 5

6) = 14

7) = 17

8) = 19

9) = 12

10) = 29

11) = 25

12) = 3

13) = 18

14) = 23