


Cookies giveaway pictograph


Data and Graphing Worksheet

Marie baked cookies for her friends.

Read the chart and answer the questions.

Number of cookies received by her friends



 = 1 cookie

1. How many cookies did Margie receive?





2. Who received 5 cookies?


3. Who received the most cookies?

4. Who received the fewest cookies?

Answers

Number of cookies received by her friends

Margie	
Riana	
Joan	
Lucho	

 = 1 cookie

1. How many cookies did Margie receive?

4

2. Who received 5 cookies?

Rianna

3. Who received the most cookies?

Lucho

4. Who received the fewest cookies?

Joan