


Counting sports balls tally sheet

Data and Graphing Worksheet

Count the sports balls and draw the tally marks. Then, write the total number of each in the chart.



Sports balls	Tally marks	Total
 Basketball		
 Soccer ball		
 Baseball		




1. How many basketballs are there?

2. Which sports ball is the greatest in number?

3. Which sports ball is the fewest in number?

Answers



Sports balls	Tally marks	Total
 Basketball	 	5
 Soccer ball	 	6
 Baseball		3

1. How many basketballs are there?

5

2. Which sports ball is the greatest in number?

Soccer ball

3. Which sports ball is the fewest in number?

Baseball