
























Apple pie sales pictograph

Data and Graphing Worksheet

Jan recorded her apple pie sales for five days.

Number of apple pies sold
























				
				
				
				
				
				
Day 1	Day 2	Day 3	Day 4	Day 5

 = 2 apple pies

- How many apple pies did Jan sell on Day 2? _____
- What day did she sell 6 pies? _____
- What day did she sell the most pies? _____
- What days did she sell the same number of pies? _____
- How many more pies did she sell on Day 5 than Day 4? _____
- How many apple pies did she sell on Day 2 and Day 3? _____

Answers

Number of apple pies sold

				
				
				
				
				
				
Day 1	Day 2	Day 3	Day 4	Day 5

 = 2 apple pies

How many apple pies did Jan sell on Day 2?

8

What day did she sell 6 pies?

Day 4

What day did she sell the most pies?

Day 3

What days did she sell the same number of pies?

Day 1 and
Day 5

How many more pies did she sell on Day 5 than Day 4?

4

How many pies did she sell on Day 2 and Day 3?

20