




























Sticker collection pictograph

Data and Graphing Worksheet

Tom, Gary, Lily, Risa and Cel recorded their sticker collection in a pictograph.

Number of stickers




























Tom								
Gary								
Lily								
Risa								
Cel								

 = 2 stickers

- Who collected 10 stickers? _____
- How many stickers did Risa collect? _____
- How many stickers did Lily collect? _____
- Who collected the most stickers? _____
- How many more stickers did Lily collect than Tom? _____
- How many stickers did Gary and Risa collect? _____

Answers

Number of stickers

Tom								
Gary								
Lily								
Risa								
Cel								

 = 2 stickers

- Who collected 10 stickers? Gary
- How many stickers did Risa collect? 8
- How many stickers did Lily collect? 14
- Who collected the most stickers? Cel
- How many more stickers did Lily collect than Tom? 8
- How many stickers did Gary and Risa collect? 18