





Tools bar graph


Data and Graphing Worksheet

Vince recorded the total number of each tool.

Create a bar graph and answer the questions.





Tools	Saw	Hammer	Screwdriver	Shovel
Total number	5 	9 	8 	8 

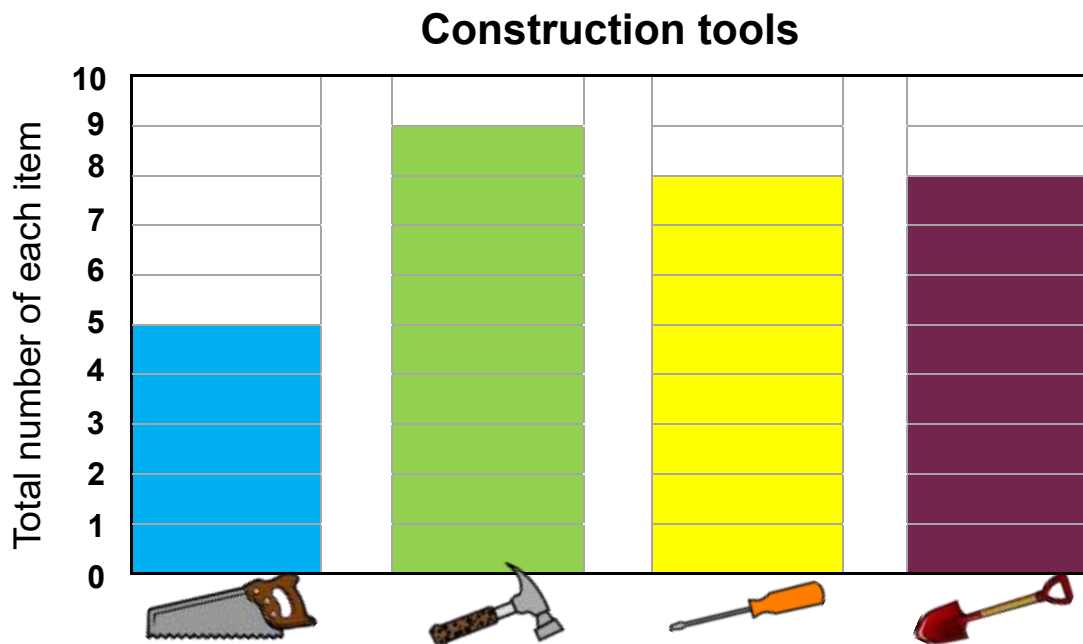
Construction tools



- How many screwdrivers are there? _____
- Which tool is the greatest in number? _____
- Which tool is the least in number? _____
- Which tools have the same number? _____
- How many shovels and hammers are there? _____
- If Vince added six more hammers, how many hammers would there be? _____

Answers

Tools	Saw	Hammer	Screwdriver	Shovel
Total number	5 	9 	8 	8 



How many screwdrivers are there?

8

Which tool is the greatest in number?

hammer

Which tool is the least in number?

saw

Which tools have the same number?

screwdriver and
shovel

How many shovels and hammers are there?

17

If Vince added six more hammers, how many hammers would there be?

15