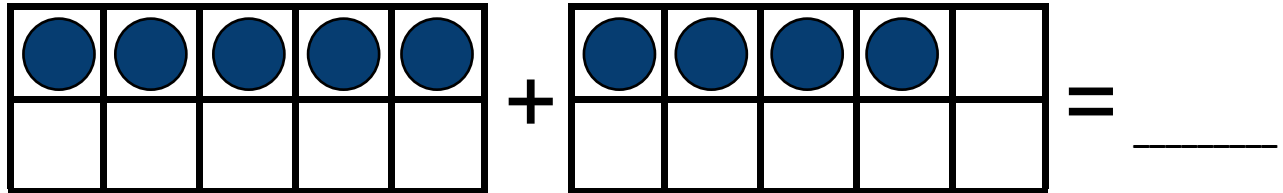


# Addition with ten frames

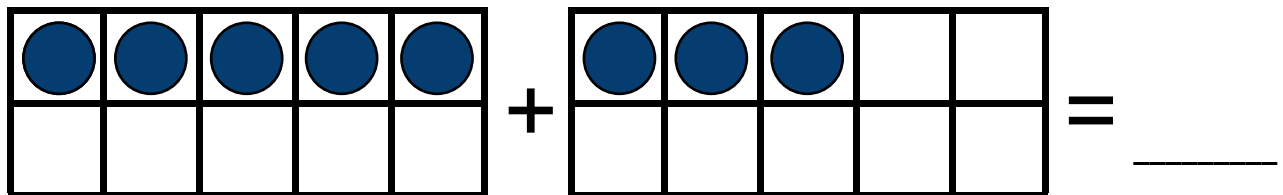
## Grade 1 Counting Worksheet

Add the counters.

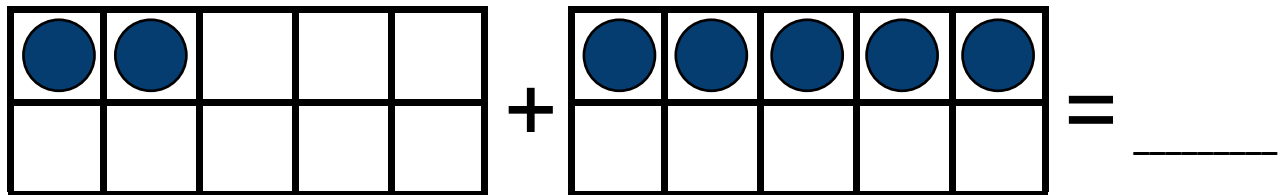
1.



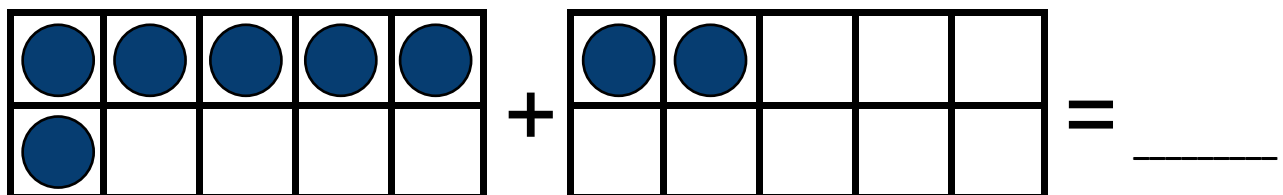
2.



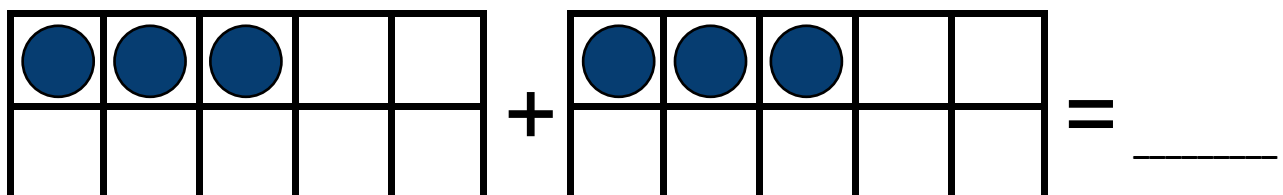
3.



4.



5.

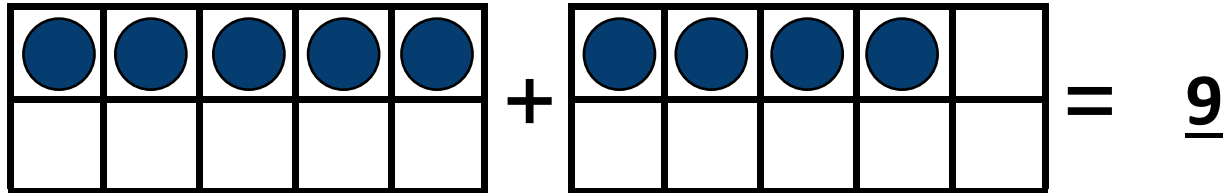


# Addition with ten frames

## Grade 1 Counting Worksheet

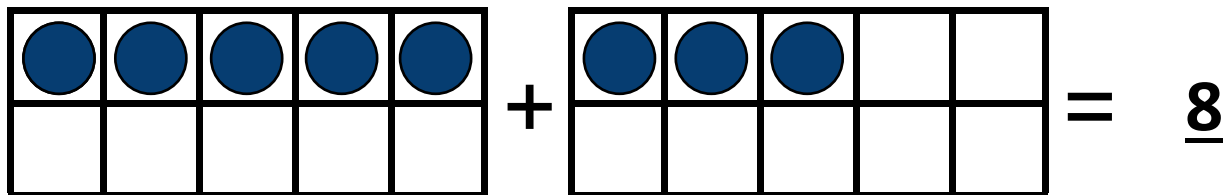
Answers:

1.



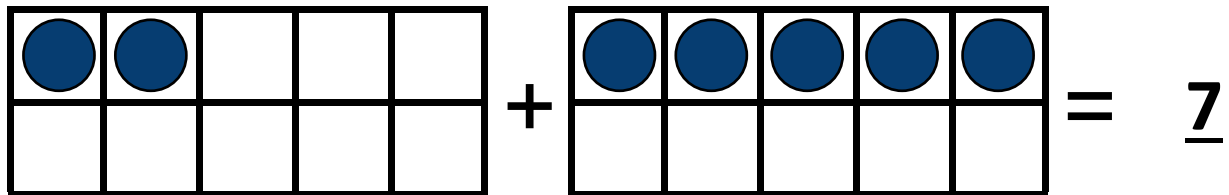
$$\begin{array}{|c|c|c|c|c|} \hline \bullet & \bullet & \bullet & \bullet & \bullet \\ \hline & & & & \\ \hline \end{array} + \begin{array}{|c|c|c|c|c|} \hline \bullet & \bullet & \bullet & \bullet & \\ \hline & & & & \\ \hline \end{array} = \underline{9}$$

2.



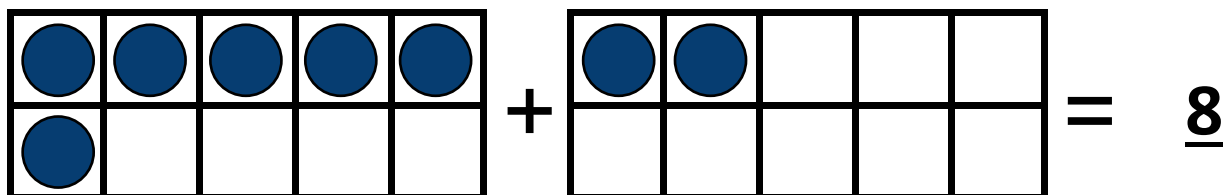
$$\begin{array}{|c|c|c|c|c|} \hline \bullet & \bullet & \bullet & \bullet & \bullet \\ \hline & & & & \\ \hline \end{array} + \begin{array}{|c|c|c|c|c|} \hline \bullet & \bullet & \bullet & & \\ \hline & & & & \\ \hline \end{array} = \underline{8}$$

3.



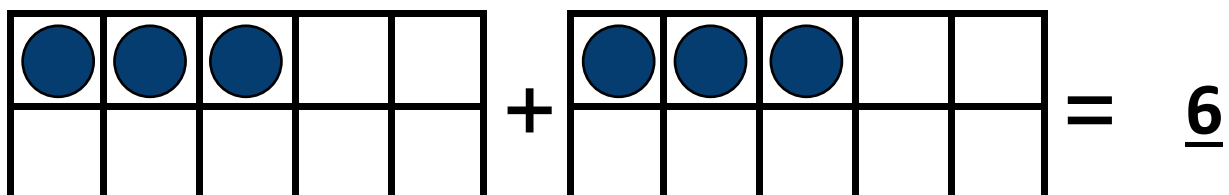
$$\begin{array}{|c|c|c|c|c|} \hline \bullet & \bullet & & & \\ \hline & & & & \\ \hline \end{array} + \begin{array}{|c|c|c|c|c|} \hline \bullet & \bullet & \bullet & \bullet & \bullet \\ \hline & & & & \\ \hline \end{array} = \underline{7}$$

4.



$$\begin{array}{|c|c|c|c|c|} \hline \bullet & \bullet & \bullet & \bullet & \bullet \\ \hline \bullet & & & & \\ \hline \end{array} + \begin{array}{|c|c|c|c|c|} \hline \bullet & \bullet & & & \\ \hline & & & & \\ \hline \end{array} = \underline{8}$$

5.



$$\begin{array}{|c|c|c|c|c|} \hline \bullet & \bullet & \bullet & & \\ \hline & & & & \\ \hline \end{array} + \begin{array}{|c|c|c|c|c|} \hline \bullet & \bullet & \bullet & & \\ \hline & & & & \\ \hline \end{array} = \underline{6}$$