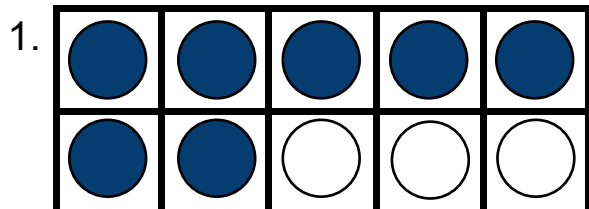


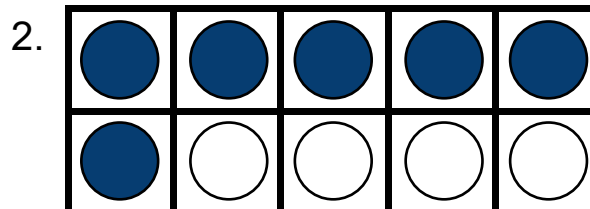
Making ten with ten frames

Grade 1 Counting Worksheet

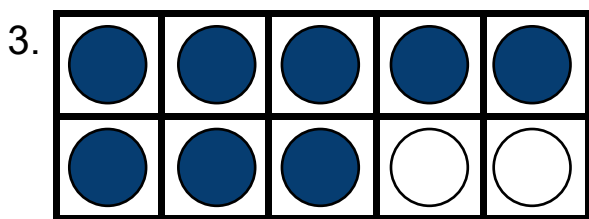
Count the blue and white counters in each frame. Fill in the blanks.



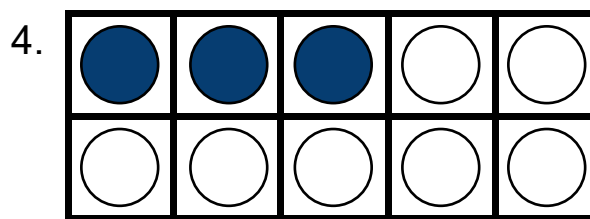
$$7 + \underline{\quad} = 10$$



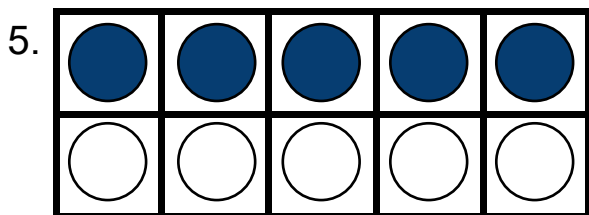
$$6 + \underline{\quad} = 10$$



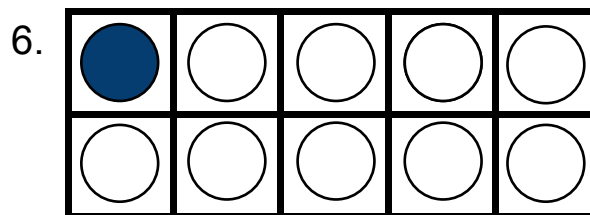
$$\underline{\quad} + 2 = 10$$



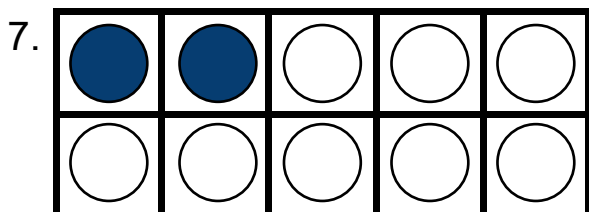
$$\underline{\quad} + 7 = 10$$



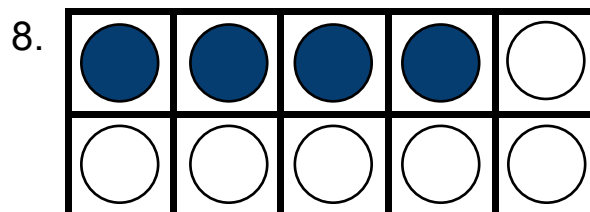
$$5 + \underline{\quad} = 10$$



$$\underline{\quad} + 9 = 10$$



$$\underline{\quad} + 8 = 10$$

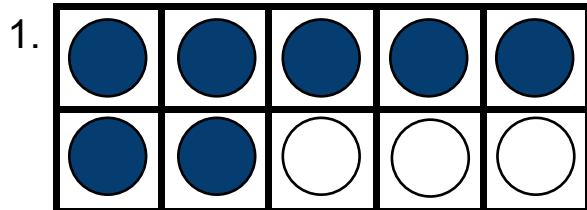


$$4 + \underline{\quad} = 10$$

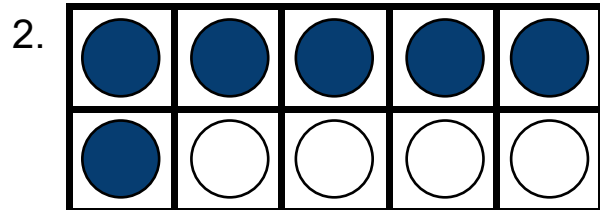
Making ten with ten frames

Grade 1 Counting Worksheet

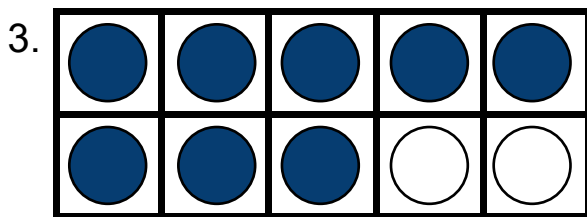
Answers:



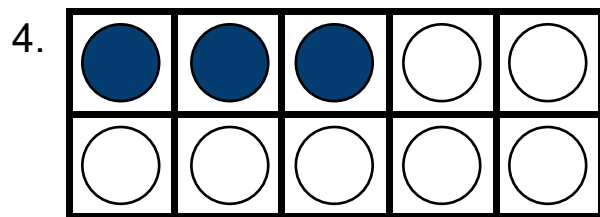
$$7 + \underline{3} = 10$$



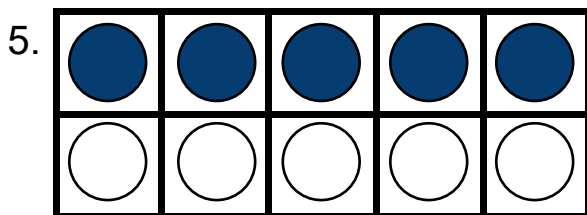
$$6 + \underline{4} = 10$$



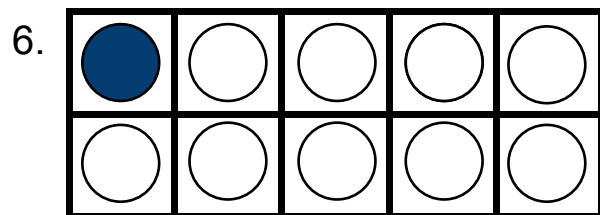
$$\underline{8} + 2 = 10$$



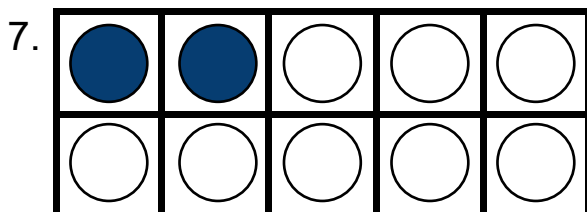
$$\underline{3} + 7 = 10$$



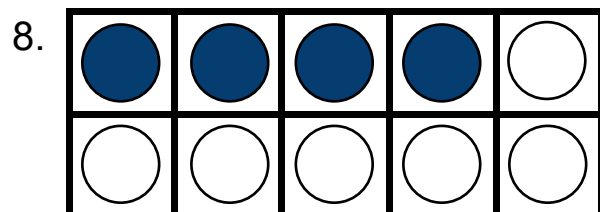
$$5 + \underline{5} = 10$$



$$\underline{1} + 9 = 10$$



$$\underline{2} + 8 = 10$$



$$4 + \underline{6} = 10$$