










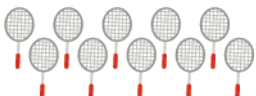






# Vertical addition

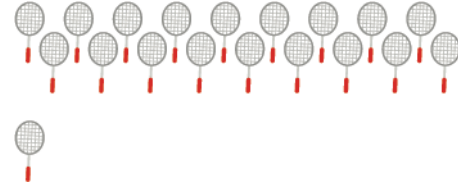
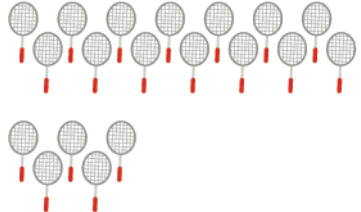
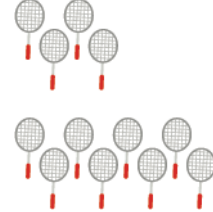



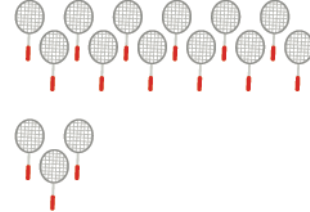
Grade 1 Addition Worksheet

How many paddles are there?

$\begin{array}{r} 18 \\ + 1 \\ \hline \\ \hline \end{array}$  	$\begin{array}{r} 14 \\ + 5 \\ \hline \\ \hline \end{array}$  
$\begin{array}{r} 4 \\ + 8 \\ \hline \\ \hline \end{array}$  	$\begin{array}{r} 11 \\ + 7 \\ \hline \\ \hline \end{array}$  
$\begin{array}{r} 9 \\ + 9 \\ \hline \\ \hline \end{array}$  	$\begin{array}{r} 10 \\ + 10 \\ \hline \\ \hline \end{array}$  
$\begin{array}{r} 12 \\ + 3 \\ \hline \\ \hline \end{array}$  	$\begin{array}{r} 6 \\ + 7 \\ \hline \\ \hline \end{array}$  

## Vertical addition

Answers:

$\begin{array}{r} 18 \\ + 1 \\ \hline 19 \end{array}$ 	$\begin{array}{r} 14 \\ + 5 \\ \hline 19 \end{array}$ 
$\begin{array}{r} 4 \\ + 8 \\ \hline 12 \end{array}$ 	$\begin{array}{r} 11 \\ + 7 \\ \hline 18 \end{array}$ 
$\begin{array}{r} 9 \\ + 9 \\ \hline 18 \end{array}$ 	$\begin{array}{r} 10 \\ + 10 \\ \hline 20 \end{array}$ 
$\begin{array}{r} 12 \\ + 3 \\ \hline 15 \end{array}$ 	$\begin{array}{r} 6 \\ + 7 \\ \hline 13 \end{array}$ 