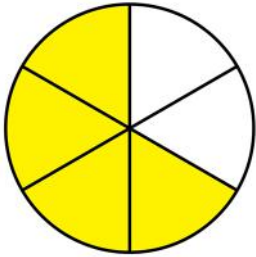
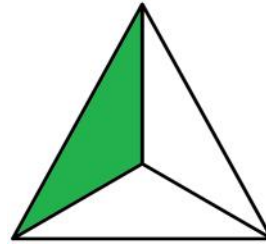



Writing fractions


Grade 1 Fractions Worksheet

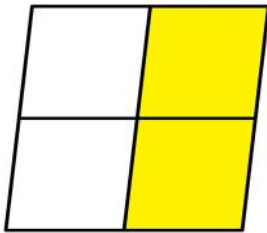
Write the fraction of the shape that is filled in.





$$\frac{\square}{\square}$$



$$\frac{\square}{\square}$$



$$\frac{\square}{\square}$$


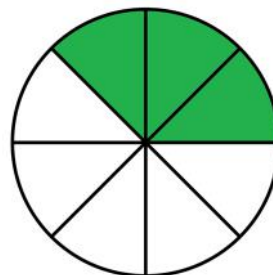
$$\frac{\square}{\square}$$


$$\frac{\square}{\square}$$


$$\frac{\square}{\square}$$


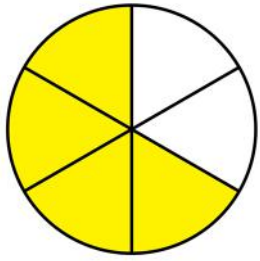
$$\frac{\square}{\square}$$


$$\frac{\square}{\square}$$


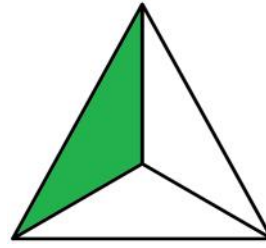
$$\frac{\square}{\square}$$


$$\frac{\square}{\square}$$

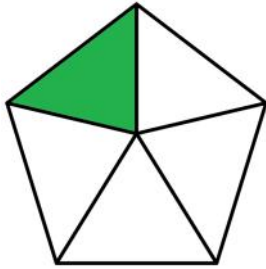
Answers




$$\frac{4}{6}$$



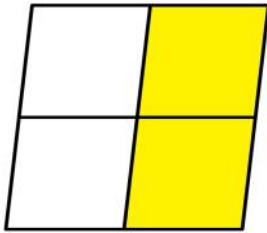
$$\frac{1}{3}$$




$$\frac{1}{5}$$




$$\frac{4}{6}$$




$$\frac{2}{4}$$




$$\frac{4}{5}$$



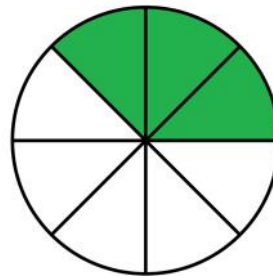
$$\frac{5}{6}$$



$$\frac{1}{2}$$



$$\frac{1}{4}$$



$$\frac{3}{8}$$