


Elapsed time - whole hours

Grade 2 Time Worksheet


Draw the clock hands to show the time it will be after the number of hours given.

1.




What time will it be in 5 hours?

2.




What time will it be in 1 hour?

3.




What time will it be in 5 hours?

4.




What time will it be in 3 hours?

5.



What time will it be in 2 hours?

6.



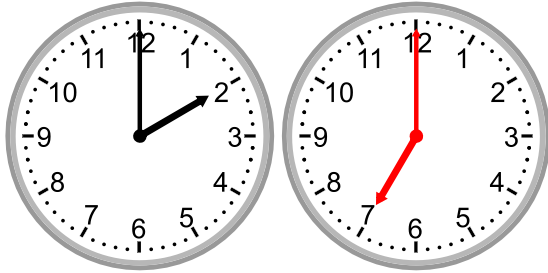
What time will it be in 2 hours?

Elapsed time - whole hours

Grade 2 Time Worksheet

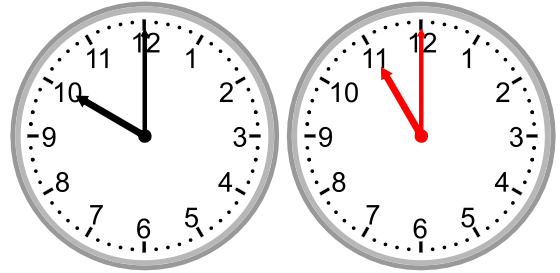
Draw the clock hands to show the time it will be after the number of hours given.

1.



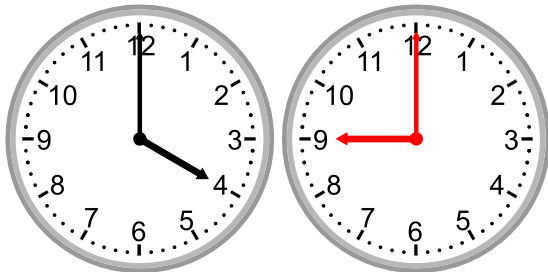
What time will it be in 5 hours?

2.



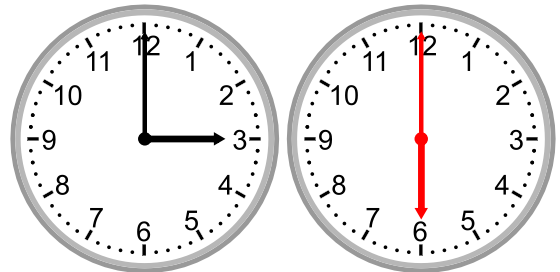
What time will it be in 1 hour?

3.




What time will it be in 5 hours?

4.



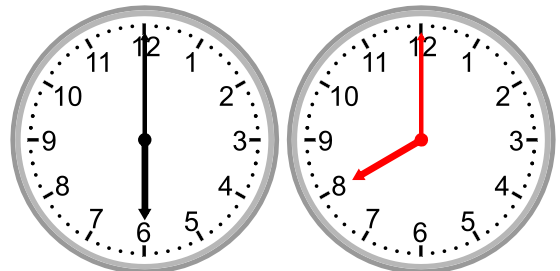
What time will it be in 3 hours?

5.



What time will it be in 2 hours?

6.



What time will it be in 2 hours?