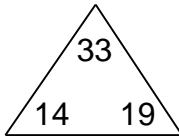


Fact families

Grade 2 Subtraction Worksheet

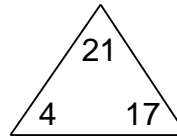
Complete each family of facts.

1.



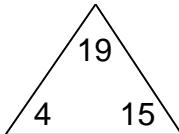
$$\begin{array}{r} \square + \square = \square \\ \square + \square = \square \\ \square - \square = \square \\ \square - \square = \square \end{array}$$

2.



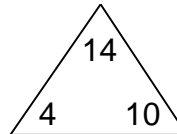
$$\begin{array}{r} \square + \square = \square \\ \square + \square = \square \\ \square - \square = \square \\ \square - \square = \square \end{array}$$

3.



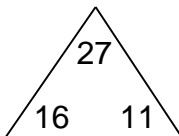
$$\begin{array}{r} \square + \square = \square \\ \square + \square = \square \\ \square - \square = \square \\ \square - \square = \square \end{array}$$

4.



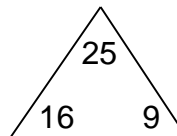
$$\begin{array}{r} \square + \square = \square \\ \square + \square = \square \\ \square - \square = \square \\ \square - \square = \square \end{array}$$

5.



$$\begin{array}{r} \square + \square = \square \\ \square + \square = \square \\ \square - \square = \square \\ \square - \square = \square \end{array}$$

6.



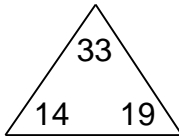
$$\begin{array}{r} \square + \square = \square \\ \square + \square = \square \\ \square - \square = \square \\ \square - \square = \square \end{array}$$

Fact families

Grade 2 Subtraction Worksheet

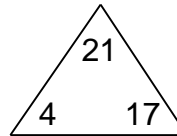
Complete each family of facts.

1.



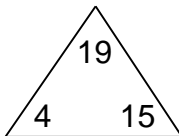
$$\begin{array}{r} 14 + 19 = 33 \\ 19 + 14 = 33 \\ 33 - 14 = 19 \\ 33 - 19 = 14 \end{array}$$

2.



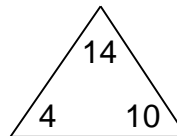
$$\begin{array}{r} 4 + 17 = 21 \\ 17 + 4 = 21 \\ 21 - 4 = 17 \\ 21 - 17 = 4 \end{array}$$

3.



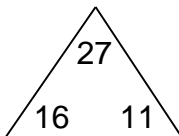
$$\begin{array}{r} 4 + 15 = 19 \\ 15 + 4 = 19 \\ 19 - 4 = 15 \\ 19 - 15 = 4 \end{array}$$

4.



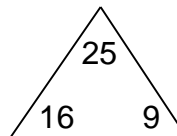
$$\begin{array}{r} 4 + 10 = 14 \\ 10 + 4 = 14 \\ 14 - 4 = 10 \\ 14 - 10 = 4 \end{array}$$

5.



$$\begin{array}{r} 16 + 11 = 27 \\ 11 + 16 = 27 \\ 27 - 16 = 11 \\ 27 - 11 = 16 \end{array}$$

6.



$$\begin{array}{r} 16 + 9 = 25 \\ 9 + 16 = 25 \\ 25 - 16 = 9 \\ 25 - 9 = 16 \end{array}$$