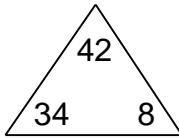


Fact families

Grade 2 Subtraction Worksheet

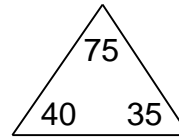
Complete each family of facts.

1.



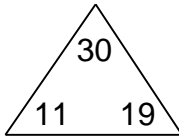
$$\begin{array}{r} \square + \square = \square \\ \square + \square = \square \\ \square - \square = \square \\ \square - \square = \square \end{array}$$

2.



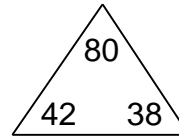
$$\begin{array}{r} \square + \square = \square \\ \square + \square = \square \\ \square - \square = \square \\ \square - \square = \square \end{array}$$

3.



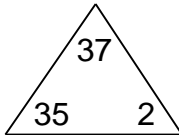
$$\begin{array}{r} \square + \square = \square \\ \square + \square = \square \\ \square - \square = \square \\ \square - \square = \square \end{array}$$

4.



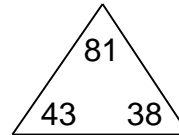
$$\begin{array}{r} \square + \square = \square \\ \square + \square = \square \\ \square - \square = \square \\ \square - \square = \square \end{array}$$

5.



$$\begin{array}{r} \square + \square = \square \\ \square + \square = \square \\ \square - \square = \square \\ \square - \square = \square \end{array}$$

6.



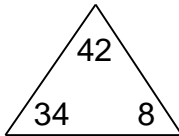
$$\begin{array}{r} \square + \square = \square \\ \square + \square = \square \\ \square - \square = \square \\ \square - \square = \square \end{array}$$

Fact families

Grade 2 Subtraction Worksheet

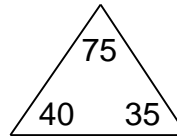
Complete each family of facts.

1.



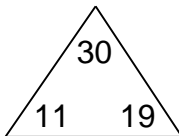
$$\begin{array}{l} \boxed{34} + \boxed{8} = \boxed{42} \\ \boxed{8} + \boxed{34} = \boxed{42} \\ \boxed{42} - \boxed{34} = \boxed{8} \\ \boxed{42} - \boxed{8} = \boxed{34} \end{array}$$

2.



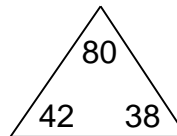
$$\begin{array}{l} \boxed{40} + \boxed{35} = \boxed{75} \\ \boxed{35} + \boxed{40} = \boxed{75} \\ \boxed{75} - \boxed{40} = \boxed{35} \\ \boxed{75} - \boxed{35} = \boxed{40} \end{array}$$

3.



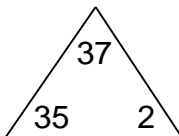
$$\begin{array}{l} \boxed{11} + \boxed{19} = \boxed{30} \\ \boxed{19} + \boxed{11} = \boxed{30} \\ \boxed{30} - \boxed{11} = \boxed{19} \\ \boxed{30} - \boxed{19} = \boxed{11} \end{array}$$

4.



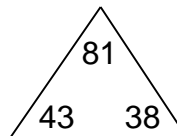
$$\begin{array}{l} \boxed{42} + \boxed{38} = \boxed{80} \\ \boxed{38} + \boxed{42} = \boxed{80} \\ \boxed{80} - \boxed{42} = \boxed{38} \\ \boxed{80} - \boxed{38} = \boxed{42} \end{array}$$

5.



$$\begin{array}{l} \boxed{35} + \boxed{2} = \boxed{37} \\ \boxed{2} + \boxed{35} = \boxed{37} \\ \boxed{37} - \boxed{35} = \boxed{2} \\ \boxed{37} - \boxed{2} = \boxed{35} \end{array}$$

6.



$$\begin{array}{l} \boxed{43} + \boxed{38} = \boxed{81} \\ \boxed{38} + \boxed{43} = \boxed{81} \\ \boxed{81} - \boxed{43} = \boxed{38} \\ \boxed{81} - \boxed{38} = \boxed{43} \end{array}$$