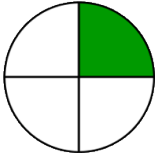
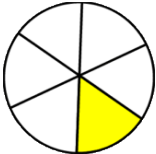
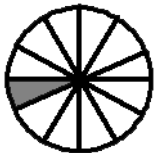
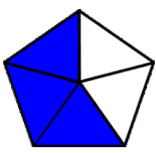

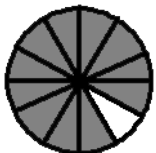
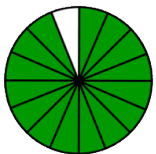


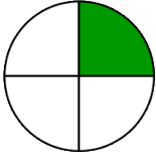
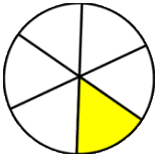
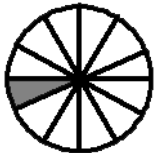
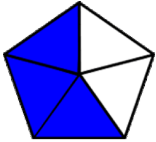

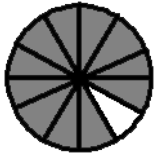
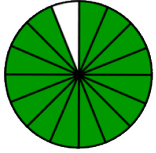
## Identify numerators and denominators

### Grade 2 Fractions Worksheet

Fill in the table.

Fraction		Numerator	Denominator
$\frac{1}{4}$			
$\frac{1}{6}$			
$\frac{1}{12}$			
$\frac{3}{5}$			
$\frac{6}{8}$			
$\frac{11}{12}$			
$\frac{15}{16}$			

## Answers

Fraction		Numerator	Denominator
$\frac{1}{4}$		<b>1</b>	<b>4</b>
$\frac{1}{6}$		<b>1</b>	<b>6</b>
$\frac{1}{12}$		<b>1</b>	<b>12</b>
$\frac{3}{5}$		<b>3</b>	<b>5</b>
$\frac{6}{8}$		<b>6</b>	<b>8</b>
$\frac{11}{12}$		<b>11</b>	<b>12</b>
$\frac{15}{16}$		<b>15</b>	<b>16</b>