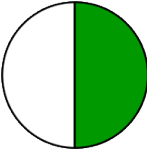
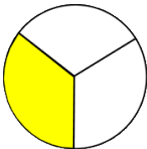
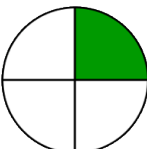
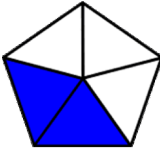
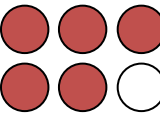
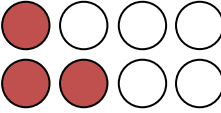
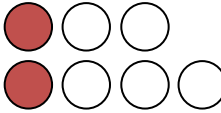


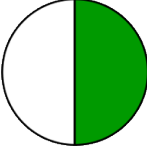
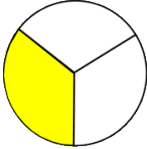
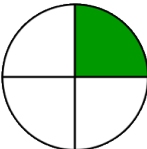
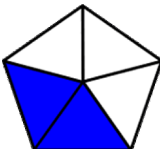
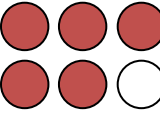
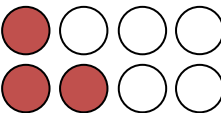
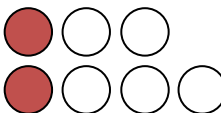
Identify numerators and denominators

Grade 2 Fractions Worksheet

Fill in the table.

| Fraction | | Numerator | Denominator |
|---------------|---|-----------|-------------|
| $\frac{1}{2}$ |  | | |
| $\frac{1}{3}$ |  | | |
| $\frac{1}{4}$ |  | | |
| $\frac{2}{5}$ |  | | |
| $\frac{5}{6}$ |  | | |
| $\frac{3}{8}$ |  | | |
| $\frac{2}{7}$ |  | | |

Answers

| Fraction | | Numerator | Denominator |
|---------------|---|-----------|-------------|
| $\frac{1}{2}$ |  | 1 | 2 |
| $\frac{1}{3}$ |  | 1 | 3 |
| $\frac{1}{4}$ |  | 1 | 4 |
| $\frac{2}{5}$ |  | 2 | 5 |
| $\frac{5}{6}$ |  | 5 | 6 |
| $\frac{3}{8}$ |  | 3 | 8 |
| $\frac{2}{7}$ |  | 2 | 7 |