

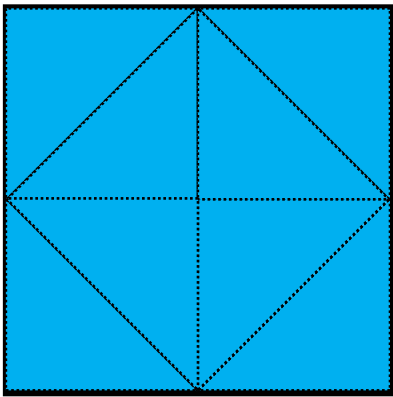
Area of rectangles measured in triangles

Grade 2 Geometry Worksheet


Determine the area of each shape by counting the number of triangles that are needed to cover the shape.



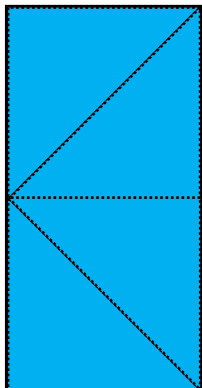
The area of this square is
 ____ triangles.



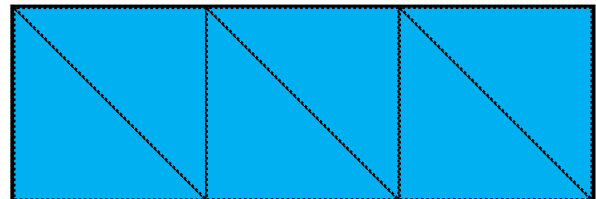
The area of this square is
 ____ triangles.



The area of this rectangle is
 ____ triangles.

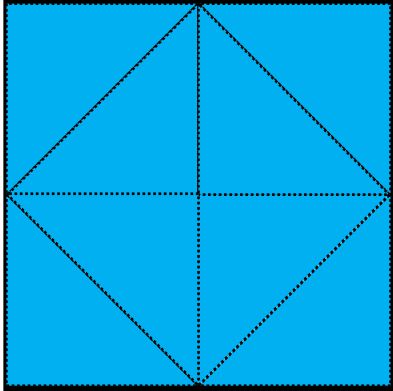


The area of this rectangle is
 ____ triangles.




Answers

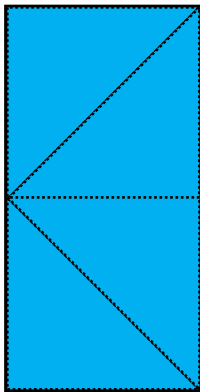
The area of this square is 8 triangles.



The area of this square is 4 triangles.



The area of this rectangle is 4 triangles.



The area of this rectangle is 6 triangles.

