

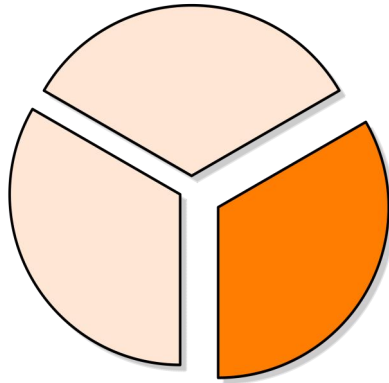
Identifying parts of a whole using shapes

Grade 2 Geometry Worksheet

Underline the correct answer.

The circle has been split into equal parts.

How much of the circle is orange?



one-half

one-third

one-fourth

How much of the star is colored red?

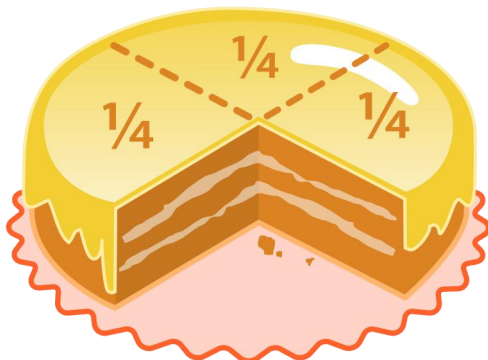


one-half

one-third

one-fourth

How much of the cake is missing?



one-half

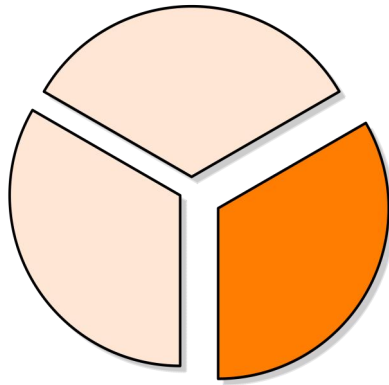
one-third

one-fourth

Answers

The circle has been split into equal parts.

How much of the circle is orange?



one-half

one-third

one-fourth

How much of the star is colored red?

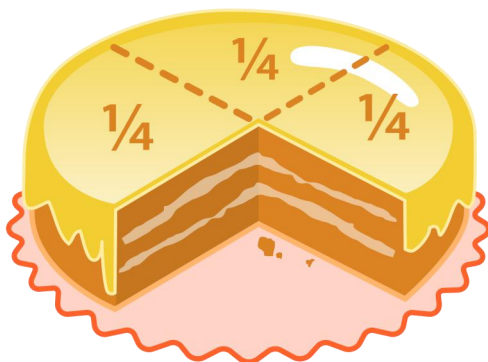


one-half

one-third

one-fourth

How much of the cake is missing?



one-half

one-third

one-fourth