





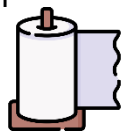



Measure lengths in inches and centimeters

Grade 2 Measurement Worksheet

Find these objects and measure them with centimeter and inch rulers.

Object	Measurement (round to the nearest inch or centimeter)	Object	Measurement (round to the nearest inch or centimeter)
Toothpaste 	_____ inches _____ centimeters	Tray 	_____ inches _____ centimeters
Soap 	_____ inches _____ centimeters	Funnel 	_____ inches _____ centimeters
Ladle 	_____ inches _____ centimeters	Mirror 	_____ inches _____ centimeters
Kitchen paper 	_____ inches _____ centimeters	Packaged hand wipes 	_____ inches _____ centimeters

Which item was the longest?

Answer: _____