

Heavier / lighter with a balance scale

Grade 2 Measurement Worksheet

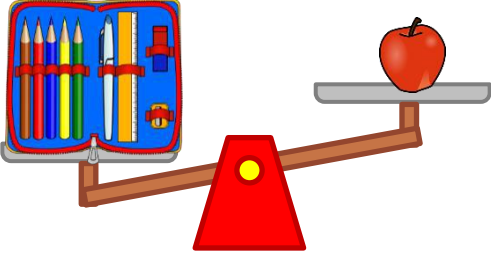

Circle the correct answers.

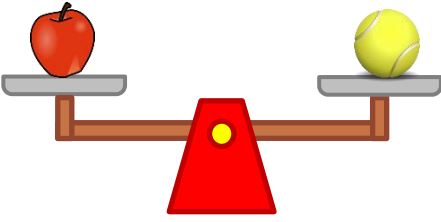
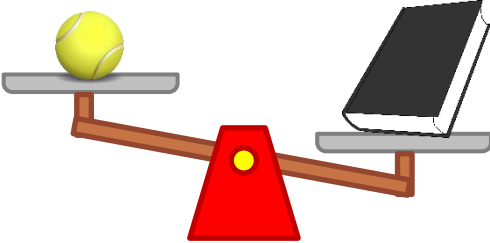
Which is lighter?			Which is heavier?		
Apple	Pencil case	Same	Pitcher	Lamp	Same
Which is lighter?			Which is heavier?		
Apple	Tennis ball	Same	Tennis ball	Book	Same
Which is heavier?			Which is lighter?		
Book	Lamp	Same	Pencil Case	Book	Same

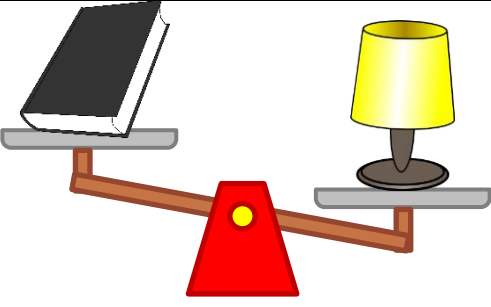
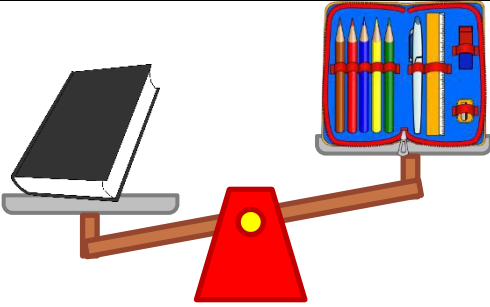
Which is heavier: the pitcher or the pencil case? _____

Which is lighter: the book or the apple? _____

Answers

					
Which is lighter?			Which is heavier?		
Apple	Pencil case	Same	Pitcher	Lamp	Same

					
Which is lighter?			Which is heavier?		
Apple	Tennis ball	Same	Tennis ball	Book	Same

					
Which is heavier?			Which is lighter?		
Book	Lamp	Book	Pencil Case	Book	Same

Which is heavier: the pitcher or the pencil case?

The pitcher.

Which is lighter: the book or the apple?

The apple.