





# Units of weight: grams & kilograms




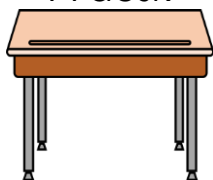
## Grade 2 Measurement Worksheet

Draw lines from each object to the best measurement unit for it.

<p>A tennis ball</p> 	<p>A dog</p> 	<p>An apple</p> 	<p>A man</p> 
--	--	--	--

**GRAMS**

**KILOGRAMS**

<p>A toy car</p> 	<p>A spoon</p> 	<p>A full box</p> 	<p>A desk</p> 
--	--	--	---

Note: We measure lighter objects (like pencils) in grams and heavier objects (like a printer) in kilograms.

Answers

