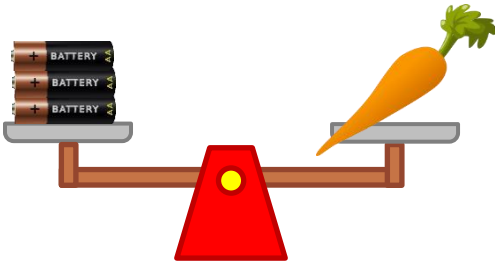
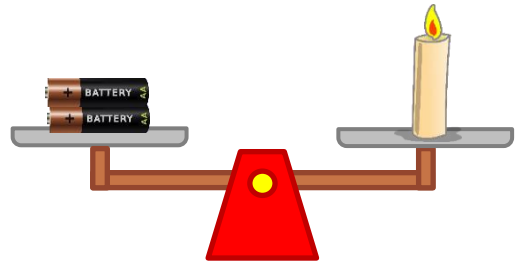


Measuring weight with non-standard units

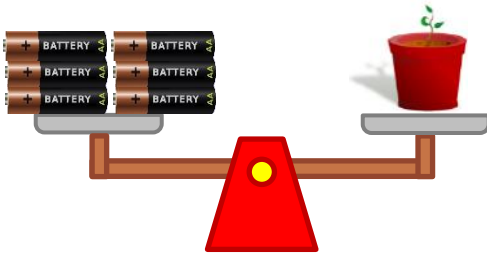
Grade 2 Measurement Worksheet



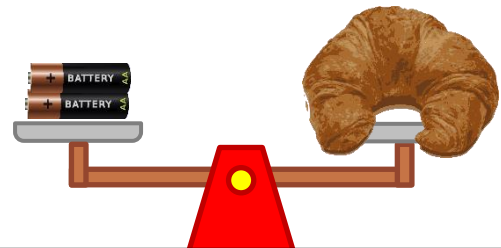
The weight of the carrot is _____ batteries.



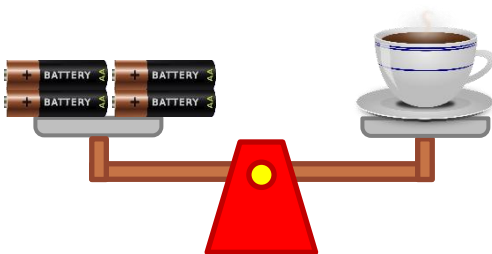
The weight of the candle is _____ batteries.




The weight of the plant is _____ batteries.



The weight of the croissant is _____ batteries.



The weight of the coffee is _____ batteries.



The weight of the cupcake is _____ batteries.

Which object is the heaviest? _____

Which is heavier: the cupcake or the croissant? _____

Answers

The weight of the carrot is **3 batteries**.

The weight of the candle is **2 batteries**.

The weight of the plant is **8 batteries**.

The weight of the croissant is **2 batteries**.

The weight of the coffee is **4 batteries**.

The weight of the cupcake is **3 batteries**.

Which object is the heaviest?

The plant is the heaviest.

Which is heavier: the cupcake or the croissant?

The cupcake.