
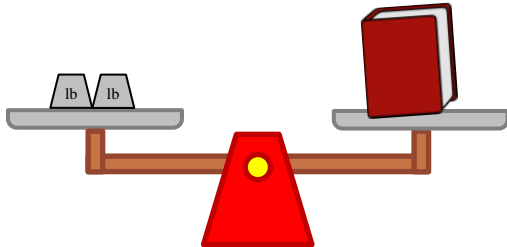


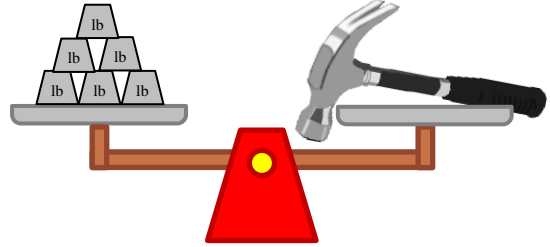
# Measure weights in pounds

## Grade 2 Measurement Worksheet

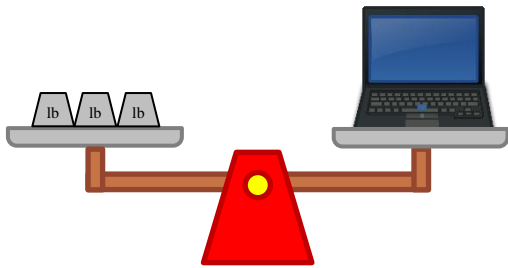
 = 1 pound



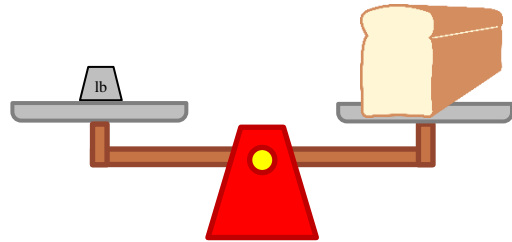
The book weighs \_\_\_\_ pounds.



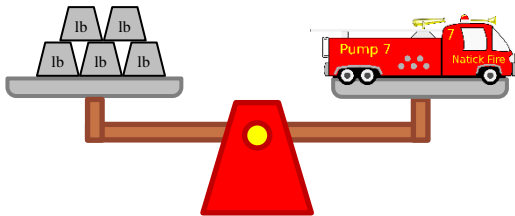
The hammer weighs \_\_\_\_ pounds.



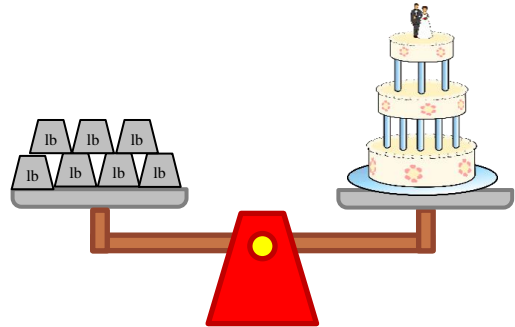
The laptop weighs \_\_\_\_ pounds.



The bread weighs \_\_\_\_ pound.



The toy truck weighs \_\_\_\_ pounds.



The cake weighs \_\_\_\_ pounds.

How much heavier is the book than the bread? \_\_\_\_\_

How much heavier is the cake than the laptop? \_\_\_\_\_

## Answers

The book weighs **2** pounds.

The hammer weighs **6** pounds.

The laptop weighs **3** pounds.

The bread weighs **1** pound.

The toy truck weighs **5** pounds.

The cake weighs **7** pounds.

How much heavier is the book than the bread?

**1 pound**

How much heavier is the cake than the laptop?

**4 pounds**