



Multiplication with arrays

Grade 2 Multiplication Worksheet


Complete the equations.




$$3 \times \square = 12$$



$$5 \times \square = 15$$




$$\square \times 6 = 18$$



$$2 \times \square = 14$$




$$\square \times 4 = 16$$




$$2 \times \square = 10$$


Answers




$$3 \times \boxed{4} = 12$$



$$5 \times \boxed{3} = 15$$




$$\boxed{3} \times 6 = 18$$



$$2 \times \boxed{7} = 14$$



$$\boxed{4} \times 4 = 16$$



$$2 \times \boxed{5} = 10$$