



Meaning of multiplication

Grade 2 Multiplication Worksheet


Circle the group that matches the equation.

$$6 \times 2 = 12$$





How many cherries are there in that group? _____

$$2 \times 3 = 6$$



How many penguins are there in that group? _____




$$4 \times 4 = 16$$



How many bananas are there in that group? _____



Answers

$$6 \times 2 = 12$$





How many cherries are there in that group? **12**

$$2 \times 3 = 6$$



How many penguins are there in that group? **6**

$$4 \times 4 = 16$$



How many bananas are there in that group? **16**