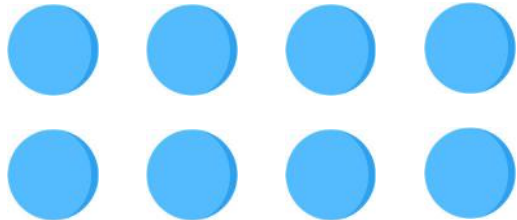


Rows, columns & arrays

Grade 2 Multiplication Worksheet

Fill in the blanks.



_____ rows of _____

_____ × _____ = _____



_____ rows of _____

_____ × _____ = _____



_____ rows of _____

_____ × _____ = _____




_____ rows of _____

_____ × _____ = _____



_____ rows of _____

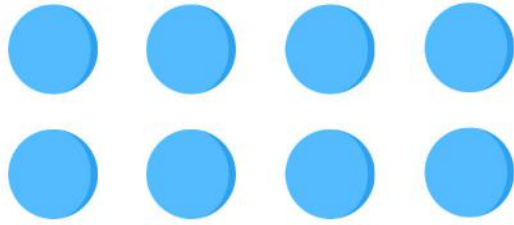
_____ × _____ = _____



_____ rows of _____

_____ × _____ = _____

Answers



2 rows of 4

$$2 \times 4 = 8$$



4 rows of 4

$$4 \times 4 = 16$$



3 rows of 3

$$3 \times 3 = 9$$




2 rows of 6

$$2 \times 6 = 12$$



4 rows of 8

$$4 \times 8 = 32$$



5 rows of 9

$$5 \times 9 = 45$$