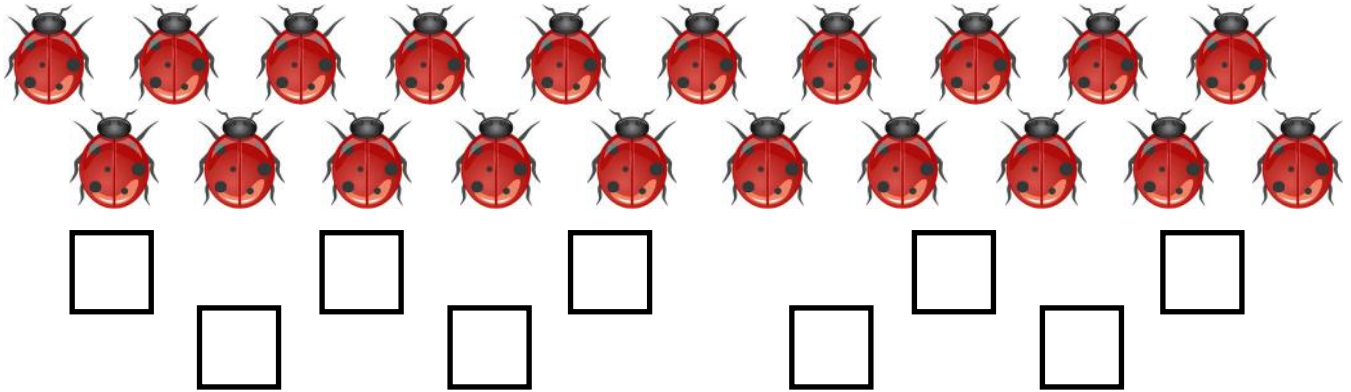


Subtraction sentences

Grade 2 Subtraction Worksheet

There are 20 bugs and some boxes. How many more boxes do we need so every bug has a box? Circle the equation and write the answer.




$20 - 4 = \underline{\quad}$

$20 - 9 = \underline{\quad}$

$20 + 10 = \underline{\quad}$

$10 - 9 = \underline{\quad}$



$14 - 9 = \underline{\quad}$

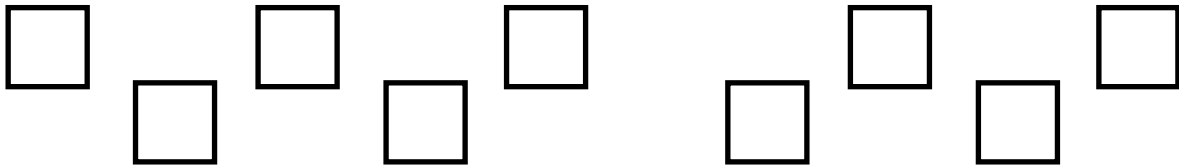
$16 - 4 = \underline{\quad}$

$20 - 16 = \underline{\quad}$

$20 - 4 = \underline{\quad}$

Answers

There are 20 bugs and some boxes. How many more boxes do we need so every bug has a box? Circle the equation and write the answer.

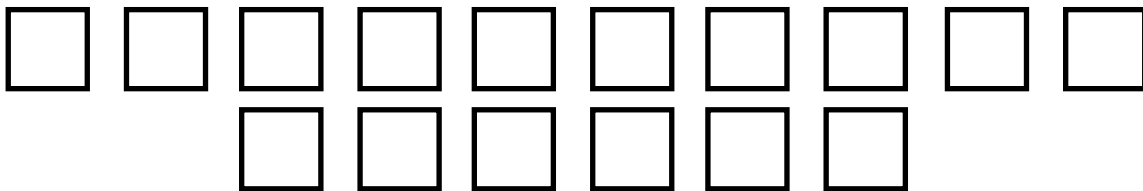


$20 - 4 = \underline{\quad}$

$20 - 9 = 11$

$20 + 10 = \underline{\quad}$

$10 - 9 = \underline{\quad}$



$14 - 9 = \underline{\quad}$

$16 - 4 = \underline{\quad}$

$20 - 16 = 4$

$20 - 4 = \underline{\quad}$