




# Telling time - 5 minute intervals (draw the clock)


## Grade 2 Time Worksheet


Draw the time shown on each clock.


1.   
4:40


2.   
8:50


3.   
6:45


4.   
2:40

5.   
3:25

6.   
2:25

7.   
12:55

8.   
12:20

9.   
7:30

# Telling time - 5 minute intervals (draw the clock)

## Grade 2 Time Worksheet

Draw the time shown on each clock.

