


Telling time - half hours (draw the clock)

Grade 2 Time Worksheet


Draw the time shown on each clock.

1.




2:30

2.




10:00

3.




6:30

4.




5:30

5.




11:00

6.




8:00

7.




7:00

8.



4:30

9.




12:30

Telling time - half hours (draw the clock)

Grade 2 Time Worksheet


Draw the time shown on each clock.

1.




2:30

2.




10:00

3.




6:30

4.




5:30

5.




11:00

6.




8:00

7.




7:00

8.



4:30

9.



12:30