


# Telling time - half hours (draw the clock)

## Grade 2 Time Worksheet


Draw the time shown on each clock.

1.




4:00

2.




2:30

3.




6:30

4.




12:00

5.




11:30

6.




10:00

7.




11:00

8.



1:30

9.




3:00

# Telling time - half hours (draw the clock)

## Grade 2 Time Worksheet


Draw the time shown on each clock.

1.




4:00

2.




2:30

3.




6:30

4.




12:00

5.




11:30

6.




10:00

7.




11:00

8.



1:30

9.



3:00