


Telling time - half hours (draw the clock)

Grade 2 Time Worksheet


Draw the time shown on each clock.

1.




1:00

2.




12:30

3.




5:30

4.




8:00

5.




12:00

6.




4:30

7.




6:30

8.



11:00

9.




9:30

Telling time - half hours (draw the clock)

Grade 2 Time Worksheet


Draw the time shown on each clock.

1.




1:00

2.




12:30

3.




5:30

4.




8:00

5.




12:00

6.




4:30

7.




6:30

8.



11:00

9.



9:30