


Telling time - quarter hours (draw the clock)

Grade 2 Time Worksheet


Draw the time shown on each clock.

1.




11:45

2.




6:15

3.




10:00

4.




12:45

5.




5:00

6.




4:00

7.




9:15

8.



4:30

9.




6:45

Telling time - quarter hours (draw the clock)

Grade 2 Time Worksheet


Draw the time shown on each clock.

1.




11:45

2.




6:15

3.




10:00

4.




12:45

5.




5:00

6.




4:00

7.




9:15

8.



4:30

9.



6:45