


Telling time - quarter hours (draw the clock)

Grade 2 Time Worksheet


Draw the time shown on each clock.

1.




10:30

2.




9:30

3.




4:45

4.




12:15

5.




11:00

6.




6:45

7.




11:45

8.



6:30

9.




4:00

Telling time - quarter hours (draw the clock)

Grade 2 Time Worksheet


Draw the time shown on each clock.

1.




10:30

2.




9:30

3.




4:45

4.




12:15

5.




11:00

6.




6:45

7.




11:45

8.



6:30

9.



4:00