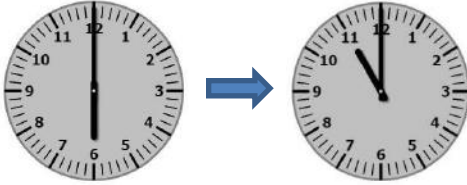


Elapsed time

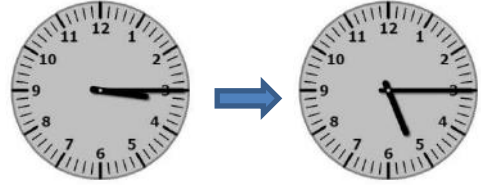
Grade 3 Time Worksheet

Write down the time which has elapsed between the two clocks.

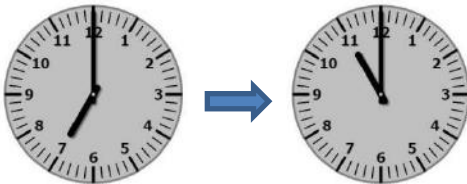
1. Elapsed time = _____ hours



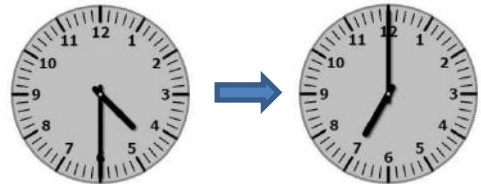
6. Elapsed time = _____ hours



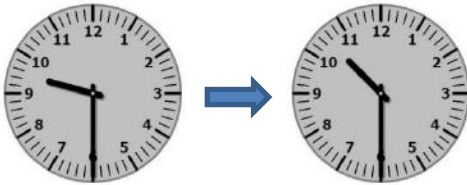
2. Elapsed time = _____ hours



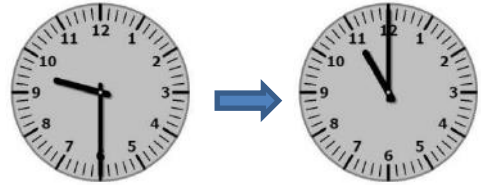
7. Elapsed time = _____ hours



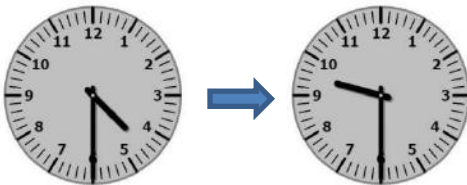
3. Elapsed time = _____ hours



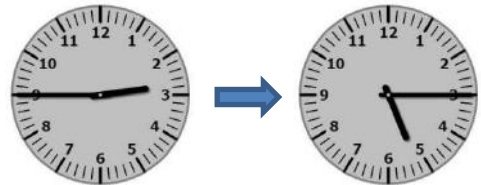
8. Elapsed time = _____ hours



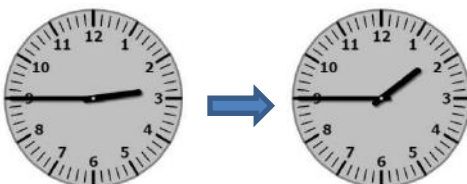
4. Elapsed time = _____ hour



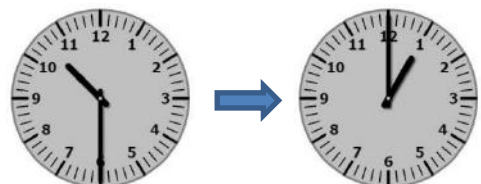
9. Elapsed time = _____ hours



5. Elapsed time = _____ hours



10. Elapsed time = _____ hours



Answers

1. 5 hours
2. 4 hours
3. 1 hour
4. 5 hours
5. 11 hours
6. 2 hours
7. 2.5 hours
8. 1.5 hours
9. 2.5 hours
10. 2.5 hours