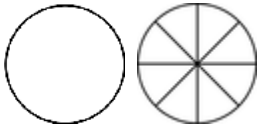


# Comparing mixed numbers & fractions

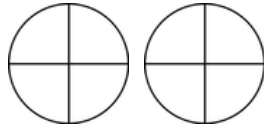
## Grade 4 Fractions Worksheet

Write > (greater than), < (less than) or = (equal to) between the fractions. Color in the fractions if it helps.

1)



$$1 \frac{3}{8}$$

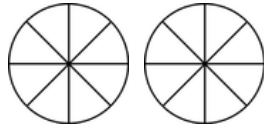


$$\frac{5}{4}$$

3)



$$\frac{15}{16}$$

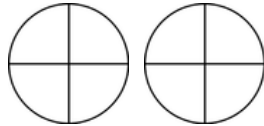


$$\frac{13}{8}$$

5)



$$\frac{14}{16}$$

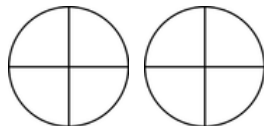


$$\frac{5}{4}$$

7)



$$\frac{6}{8}$$



$$\frac{5}{4}$$

2)

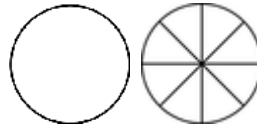


$$1 \frac{1}{3}$$

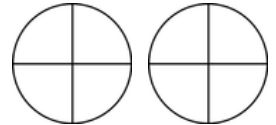


$$\frac{5}{6}$$

4)

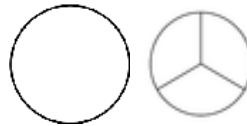


$$1 \frac{3}{8}$$



$$\frac{7}{4}$$

6)



$$1 \frac{2}{3}$$

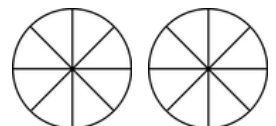


$$\frac{4}{6}$$

8)



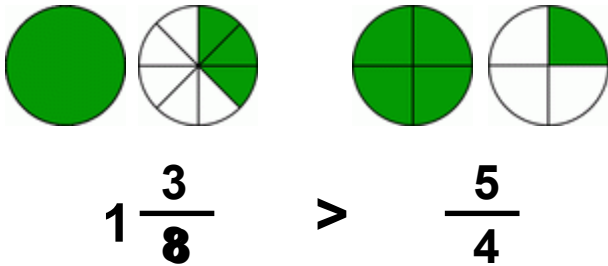
$$1 \frac{3}{4}$$



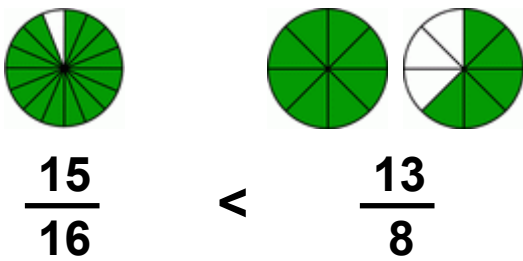
$$\frac{10}{8}$$

## Answers

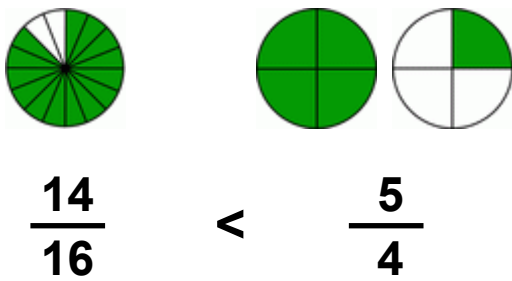
1)



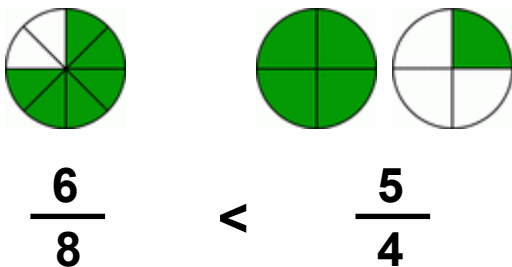
3)



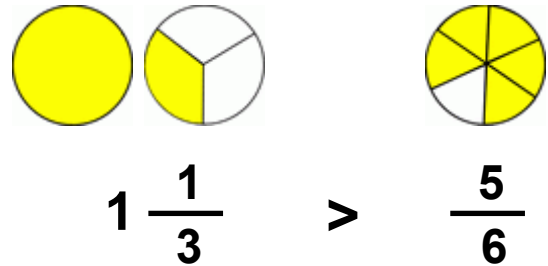
5)



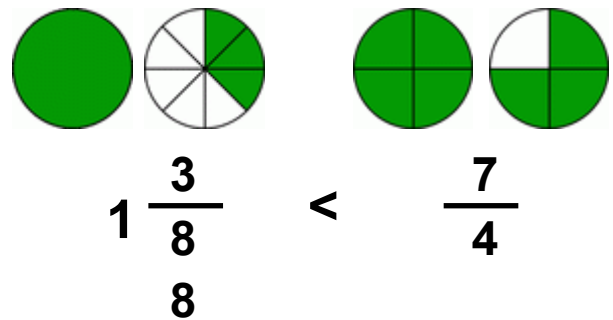
7)



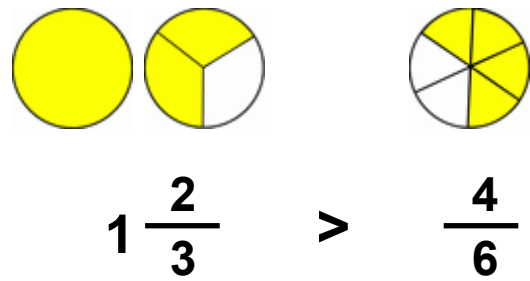
2)



4)



6)



8)

