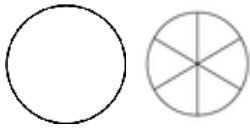


Comparing mixed numbers & fractions

Grade 4 Fractions Worksheet

Write > (greater than), < (less than) or = (equal to) between the fractions. Color in the fractions if it helps.

1)



$$1 \frac{1}{6}$$

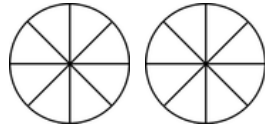


$$\frac{4}{3}$$

3)



$$\frac{15}{16}$$

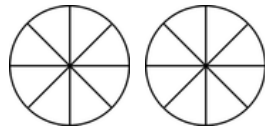


$$\frac{9}{8}$$

5)



$$\frac{14}{16}$$

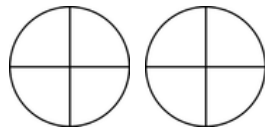


$$\frac{13}{8}$$

7)

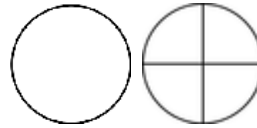


$$\frac{12}{16}$$

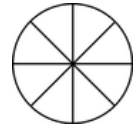


$$\frac{5}{4}$$

2)

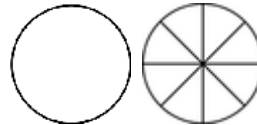


$$1 \frac{3}{4}$$

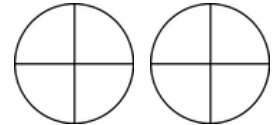


$$\frac{7}{8}$$

4)

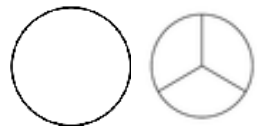


$$1 \frac{7}{8}$$



$$\frac{7}{4}$$

6)



$$1 \frac{1}{3}$$

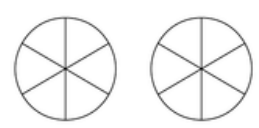


$$\frac{5}{6}$$

8)



$$1 \frac{2}{3}$$



$$\frac{8}{6}$$