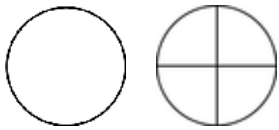


Comparing mixed numbers & fractions

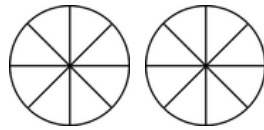
Grade 4 Fractions Worksheet

Write > (greater than), < (less than) or = (equal to) between the fractions. Color in the fractions if it helps.

1)



$$1 \frac{1}{4}$$

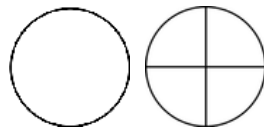


$$\frac{3}{2}$$

3)

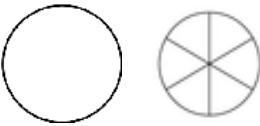


$$\frac{15}{16}$$




$$1 \frac{1}{4}$$

5)



$$1 \frac{4}{6}$$

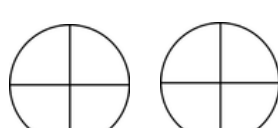


$$\frac{5}{3}$$

7)

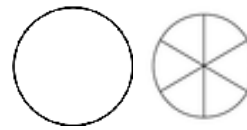


$$\frac{6}{8}$$



$$\frac{6}{4}$$

2)

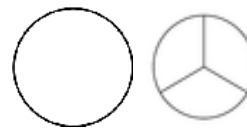


$$1 \frac{2}{6}$$



$$\frac{2}{3}$$

4)

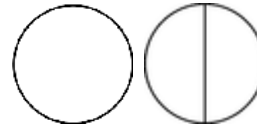


$$1 \frac{1}{3}$$

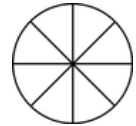


$$\frac{5}{6}$$

6)



$$1 \frac{1}{2}$$



$$\frac{7}{8}$$

8)



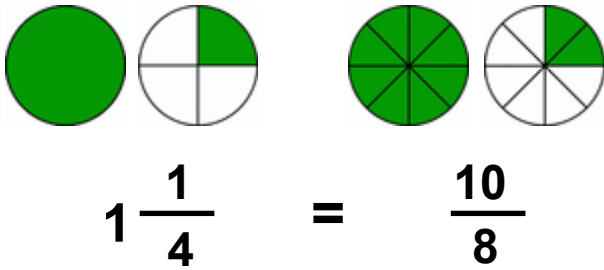
$$\frac{14}{16}$$



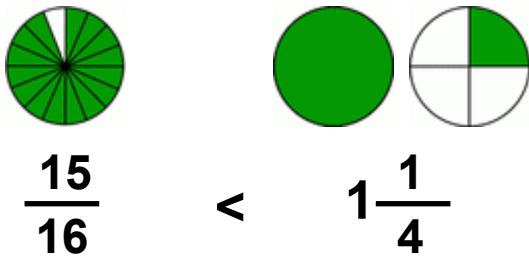
$$\frac{6}{4}$$

Answers

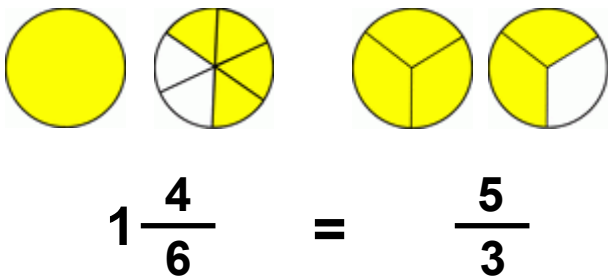
1)



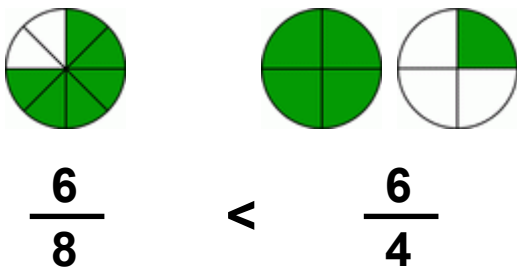
3)



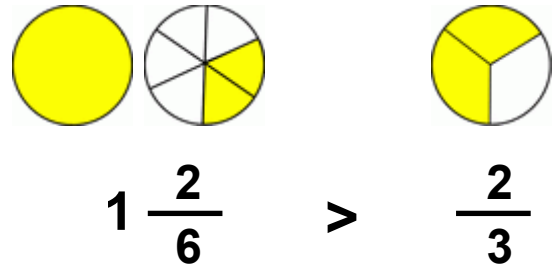
5)



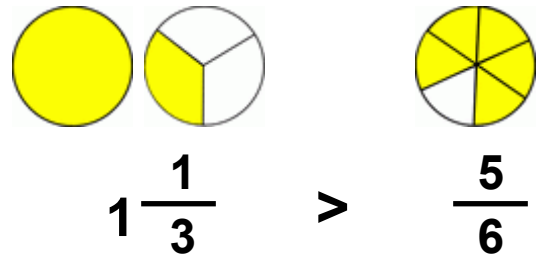
7)



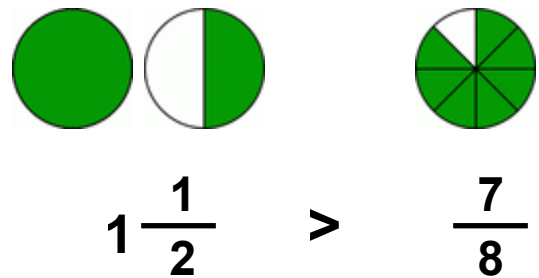
2)



4)



6)



8)

