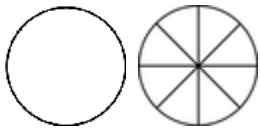


Comparing mixed numbers & fractions

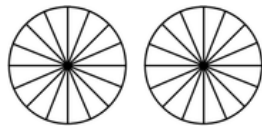
Grade 4 Fractions Worksheet

Write > (greater than), < (less than) or = (equal to) between the fractions. Color in the fractions if it helps.

1)

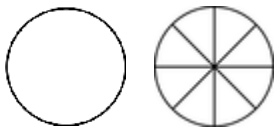


$$1 \frac{2}{8}$$

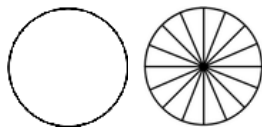


$$\frac{20}{16}$$

3)

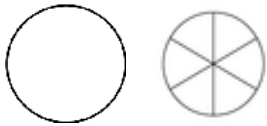


$$1 \frac{7}{8}$$

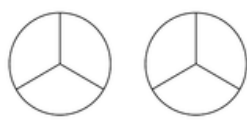


$$1 \frac{14}{16}$$

5)



$$1 \frac{2}{6}$$

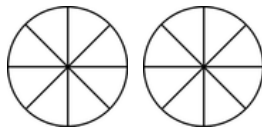


$$\frac{4}{3}$$

7)

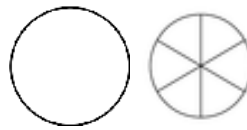


$$\frac{12}{16}$$



$$\frac{9}{8}$$

2)

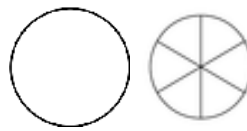


$$1 \frac{1}{6}$$




$$\frac{2}{3}$$

4)

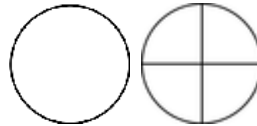


$$1 \frac{3}{6}$$

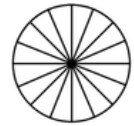


$$\frac{4}{3}$$

6)



$$1 \frac{1}{4}$$

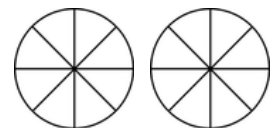


$$\frac{13}{16}$$

8)



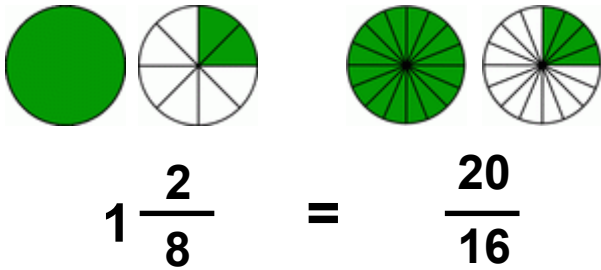
$$\frac{11}{16}$$



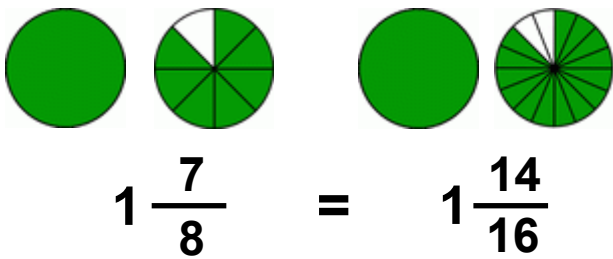
$$\frac{9}{8}$$

Answers

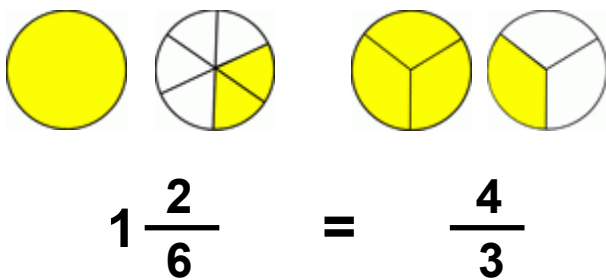
1)



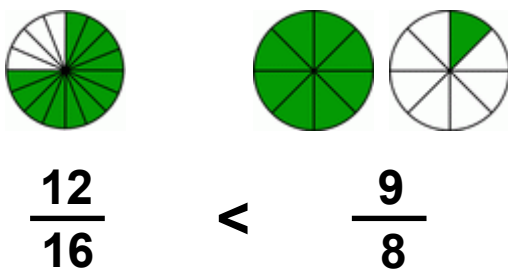
3)



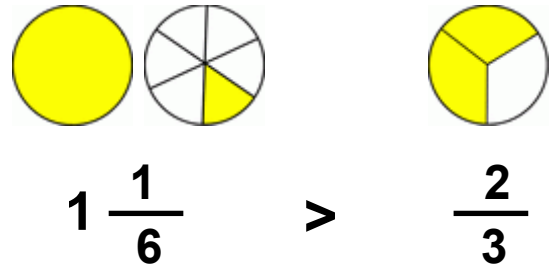
5)



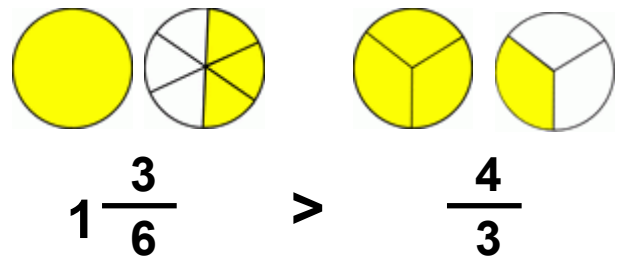
7)



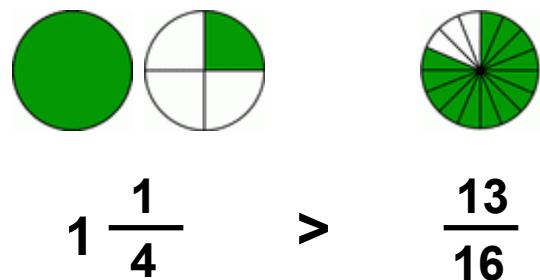
2)



4)



6)



8)

