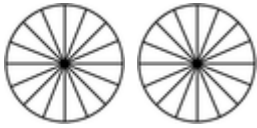


Comparing proper & improper fractions

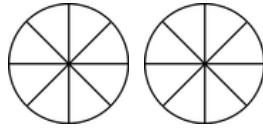
Grade 4 Fractions Worksheet

Write > (greater than), < (less than) or = (equal to) between the fractions. Color in the fractions if it helps.

1)



$$\frac{18}{16}$$

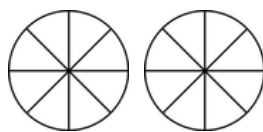


$$\frac{9}{8}$$

3)

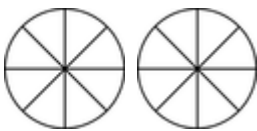


$$\frac{14}{16}$$

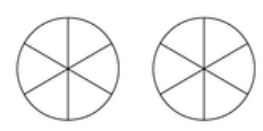


$$\frac{11}{8}$$

5)

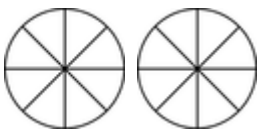


$$\frac{10}{8}$$




$$\frac{8}{6}$$

7)



$$\frac{9}{8}$$

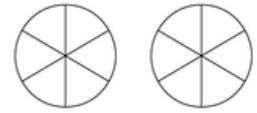


$$\frac{4}{3}$$

2)

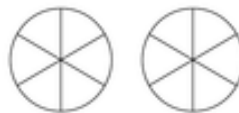


$$\frac{5}{3}$$

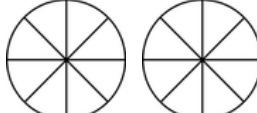


$$\frac{7}{6}$$

4)

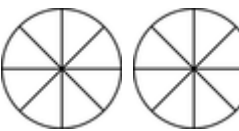


$$\frac{7}{6}$$

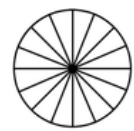


$$\frac{9}{8}$$

6)

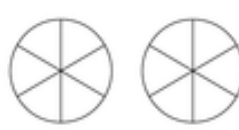


$$\frac{9}{8}$$

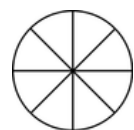


$$\frac{15}{16}$$

8)



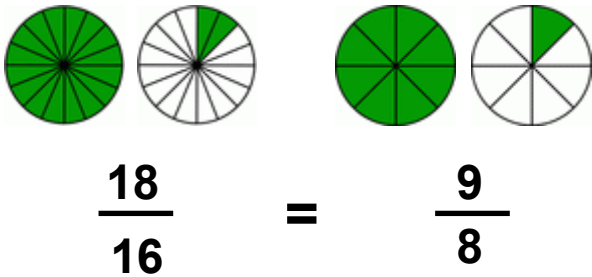
$$\frac{8}{6}$$



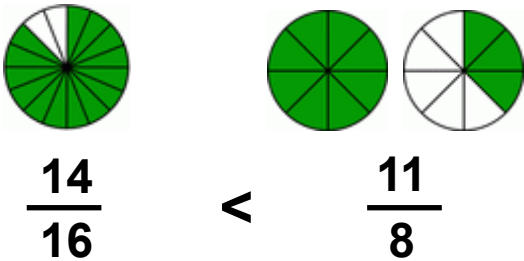
$$\frac{7}{8}$$

Answers

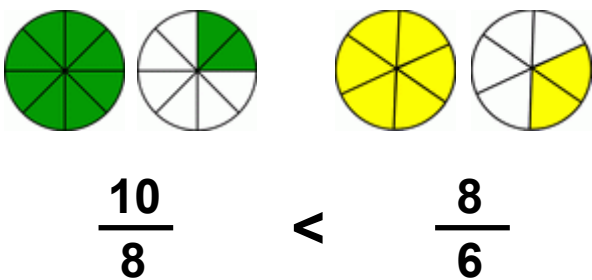
1)



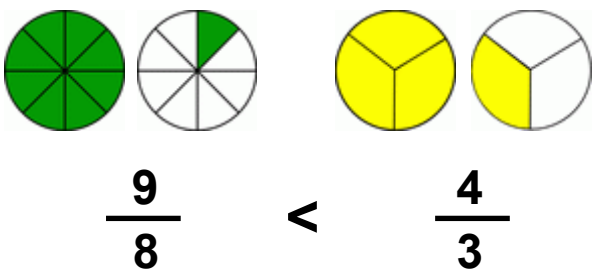
3)



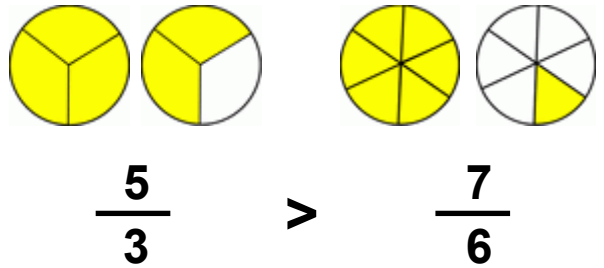
5)



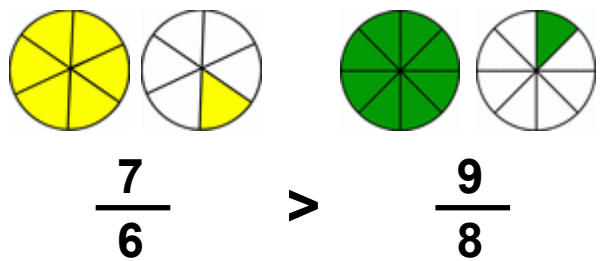
7)



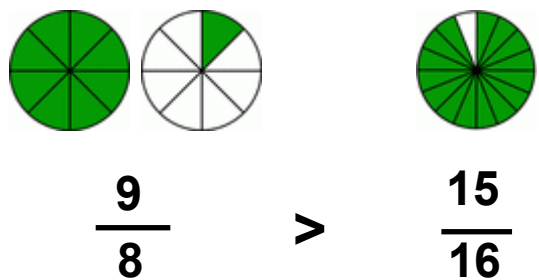
2)



4)



6)



8)

